



*SECTION 2*

**ADVANCED  
PRACTICAL  
RADIO ENGINEERING**

**TECHNICAL ASSIGNMENT**

**ULTRA-HIGH FREQUENCY TECHNIQUE**

Copyright 1947 by  
Capitol Radio Engineering Institute  
Washington, D. C.

251E

- TABLE OF CONTENTS -

ULTRA-HIGH FREQUENCY TECHNIQUE

	Page
ADVANTAGES AND DISADVANTAGES OF ULTRA-HIGH	
FREQUENCIES.....	1
U.H.F. PROPAGATION.....	4
CIRCUIT ELEMENTS.....	17
TRANSMISSION LINES.....	17
<i>Q</i> OF A RESONANT LINE.....	18
SHORT- AND OPEN-CIRCUITED LINES.....	20
DEPTH OF PENETRATION.....	21
FURTHER REMARKS.....	22
NON-RESONANT LINES.....	23
THE LINE AS A TRANSFORMER.....	25
APPLICATIONS.....	26
Shortening of Lines.....	27
Calculation of Line Impedance.....	29
Line Taps.....	32
Line Oscillator.....	34
Antenna Coupling.....	36
Selectivity of Circuit.....	37
Image Rejection.....	38
Calculation of <i>Q</i> of Loaded Line.....	40
Location of Antenna Tap.....	42
Determination of Image Response.....	43
Loop Coupling.....	50
Voltage Step Up.....	51
Stub Matching.....	52
CONCLUSION.....	55
APPENDIX I—DERIVATION OF CURVES FOR DETERMINING	
TAP POSITION.....	56

## ULTRA-HIGH FREQUENCY TECHNIQUE

### ADVANTAGES AND DISADVANTAGES OF ULTRA-HIGH FREQUENCIES

The domain of ultra-high frequencies has become an exceedingly important one at the present time, and the trend is unmistakably toward the use of more and more services in this range of the spectrum. It must not be supposed, however, that u.h.f. channels will ultimately replace the low-frequency channels: rather they will supplement the latter.

Indeed, in the case of many services, the reason for the use of u.h.f. is fundamentally that the low and intermediate frequency and the medium short-wave portions of the spectrum were practically used up, and new channels could be found only at higher frequencies. As these channels began to be studied, and even employed, advantages and also some very grave disadvantages were discovered, and research and development are continuing at an accelerated pace to minimize the difficulties that lie in the way of their utilization. The student can, with benefit, review the series of assignments on antennas, particularly where reference to u.h.f. is made.

The term "ultra-high frequencies" is often used as a general term to denote frequencies above about 30 mc. However, the F.C.C. has adopted certain designations which were given in an earlier assignment on radiation, and which will be repeated here:

FREQUENCY	WAVELENGTH	DESIGNATION
30 — 300 mc	10 — 1 meters	very high frequencies (v.h.f.)
300 — 3,000 mc	1 meter — 10 cm	ultra-high frequencies (u.h.f.)
3,000 — 30,000 mc	10 cm — 1 cm	super-high frequencies (s.h.f.)

Although these help to distinguish one range from the other, no harm will be done if in this assignment all frequencies in the above three ranges are denoted by the single term, ultra-high frequencies, and where there is a difference in behavior, the frequency range under discussion will be given numerically.

If one considers the range from 0 to 30 mc, and compares it with the range from 30 to 30,000 mc, one will find that the latter band is

$$\frac{30000 - 30}{30}$$

or nearly 1,000 times as great as the low-frequency and medium short-wave bands combined! This indicates the enormous amount of room available in the spectrum beyond the 30-mc band, and is the original, if not principal reason for going into that part of the spectrum.

There are several other advantages besides that of more room. The advent of f.m., and particularly television, has necessitated wide-band modulation and radiation. For example, consider a television carrier frequency of 51.25 mc. Suppose it is modulated with video (picture) frequencies up to  $4\frac{1}{4}$  mc. There will appear in the form of upper and lower side bands, frequencies ranging from close to the carrier frequency to  $51.25 + 4.25 = 55.5$  mc (upper side band) and  $51.25 - 4.25 = 47$  mc (lower side band) for the highest video frequency of 4.25 mc.

A suitable vestigial side-band filter removes most of the lower side bands without appreciably affecting the upper side bands. The band of frequencies that is then involved is shown in Fig. 1. The sound carrier and side bands have

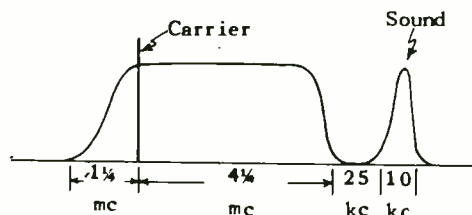


Fig. 1.—Band of frequencies for a television channel.

also been indicated. Fig. 1 shows the wide band of frequencies that has to be radiated by the transmitting antenna, picked up by the receiving antenna, and possibly amplified by an r.f. stage in the receiver.

Suppose the carrier frequency were 2 megacycles. The lowest video side band to be radiated would be  $2 - 1\frac{1}{4} = \frac{3}{4}$  megacycles, and the highest video side band would be  $2 + 4\frac{1}{4} = 6\frac{1}{4}$  megacycles. The radiation resistance of the antenna would vary widely over such a range— $6\frac{1}{4} - \frac{3}{4} = 5\frac{1}{2}$  megacycles.

Moreover, considering the antenna as a transmission line, if it were a quarter-wave at 2 mc, it would be  $(\frac{3}{4} \div 2) \times \lambda/4 = \frac{3}{32} \lambda$  at .75 mc and  $(6\frac{1}{4} \div 2) \times \lambda/4 = \frac{25}{32} \lambda$  or slightly over  $\frac{3}{4} \lambda$  at  $6\frac{1}{4}$  mc. Such an antenna would be practically impossible to tune *simultaneously* over such a wide range; it could not be made aperiodic except over a range of possibly

160 kc.

Consider, however, a carrier of 51.25 mc. Suppose a dipole is employed that is a half-wave at this frequency. Then at  $51.25 + 4.25 = 55.5$  mc, it would be  $(55.5/51.25) \times \lambda/2 = .542\lambda$  or practically  $\lambda/2$ , and even more nearly  $\lambda/2$  at the lower side-band frequency of  $51.25 - 1.25 = 50$  mc. The above illustrates an important advantage of u.h.f. carriers for television transmission, or any other wide-band system, such as that for pulse transmission.

Another advantage besides that of wide-band possibilities is that of accuracy of aeronautical navigation courses. This matter is discussed in detail in the Aeronautical Radio Engineering Section of the course. Suffice it to say at this point that when radio courses in the form of beam transmissions at about 100 mc are used instead of at 300 kc, particularly in mountainous regions, there is less danger of course bending and multiple courses. The C.A.A. (Civil Aeronautical Administration) is changing over from l.f. to the u.h.f. radio ranges as rapidly as possible.

A further point to note, particularly in connection with instrument landing systems, is that horizontally polarized waves, when reflected from the earth, appear to be less susceptible to variations in ground conditions as compared to vertically polarized waves. This tends to make a horizontally polarized glide path more reliable than one that is vertically polarized.

Since horizontal polarization implies a horizontal antenna, and this in turn, for appreciable low-angle radiation, means an antenna removed by several wavelengths from

the earth's surface, it is evident that only in the u.h.f. range can horizontal polarization be feasible without the antenna having to be set at a prohibitive height above the earth's surface. Furthermore, at very high frequencies, parabolic reflectors and horn radiators are feasible, and these can radiate such narrow beams that the radiation does not necessarily have to strike and be reflected by the earth. In this case the radiation is entirely independent of ground conditions—such as snow and ice.

Besides the above advantages of u.h.f., there are other considerations that may be considered as advantages in some applications and as disadvantages in others. Thus, the range of transmission is limited to less than twice the line-of-sight for f.m. at about 88.1 mc, and not appreciably more than line-of-sight for the more exacting service of television at 50 mc and above. This means that stations separated by sufficient distances (more than twice the line-of-sight) can operate on the same frequency without objectionable interference. This tends further to conserve the number of channels required for a type of service such as broadcasting or aeronautical radio ranges.

Consider, for example, f.m. broadcasting on a frequency of 88.1 mc. If the antenna is sufficiently elevated, coverage over a radius of 90 miles is entirely feasible. This is not noticeably less than the primary coverage area for standard broadcast stations.

Another station 180 miles away can presumably employ the same frequency, and yet not interfere with the pickup of this station in its service area, particularly in view

of the ability of the f.m. receiver to suppress the weaker of two signals in the presence of the stronger. However, this matter of common frequency assignment has not as yet been thoroughly studied, and modifications to the above discussion may have to be made because of variations in transmission from time to time, particularly with reference to the tropospheric wave (see assignment on antennas).

The above limitation of transmission appears to be an advantage. However, where long-distance transmission is desired, u.h.f. is out of the question, and one has to rely upon the medium short waves and upon the very low-frequency bands for this purpose, unless a chain of relay stations is possible and acceptable.

Another advantage of u.h.f. is that all components can be made relatively smaller: smaller, light-weight transmitters, receivers, and antennas. Alternatively, in the case of antennas, complicated arrays that do not require excessive space are feasible, with the result that sharp beams can be produced. This is equivalent to an increase in transmitter power, and is true even when the beam is compressed only in the vertical plane into the form of a nearly horizontal conical sheet, as for broadcasting purposes. Compare this with the difficulty of obtaining a maximum of ground wave with a minimum of sky wave in the standard broadcast band.

There are, however, some very serious difficulties encountered in attempting to employ u.h.f. One is that the circuit components become vanishingly small if one attempts to employ them in lumped form. Fortunately, alternative forms of cir-

cuit elements of the distributed type become available. For example, short-circuited and open-circuited sections of transmission lines of very high  $Q$  can be used as resonant elements, particularly in the lower frequency portion of the u.h.f. spectrum, and cavity resonators lend themselves admirably for the same purpose in the upper frequency portion of the u.h.f. spectrum. Indeed, if lumped elements, such as coils and condensers, are attempted to be used, it will be found that they inherently tend to function as distributed circuit elements, and appear as inductances or capacities depending upon the frequency at which they are operated. (Review the assignment on r.f. measurements.) Even short connecting leads function as transmission lines and accordingly must be taken into account.

As a result, all connections should be as short and direct as possible. This refers even to the internal tube connections and to the size of the tube elements. For that reason the parts, and particularly the tubes, become so small that they are incapable of dissipating the heat generated when handling large amounts of power. Thus, power output in the very high frequency portion of the u.h.f. domain is generally on the order of a few hundred watts or less, and in many cases a transmitter may have an output of but a few watts.\*

To counteract this severe power limitation is the fact that the rad-

\*In the case of pulse transmission, the instantaneous peak power may be on the order of kilowatts, or even more than a megawatt, but the average power will be a small fraction of this (depending upon the pulse width).

iated energy can be concentrated into narrow beams and also picked up by highly directional receiving antennas, so that at least in point-to-point communication a few watts in the u.h.f. region may be as effective as hundreds of watts in the lower frequency portion of the spectrum. Nevertheless, the power limitations of vacuum tubes operating at ultra-high frequencies constitute one of the greatest problems in utilizing this part of the spectrum.

The first topic to be considered in detail will be that of Propagation.

#### U.H.F. PROPAGATION

In a previous assignment it was pointed out that frequencies above about 30 or 40 mc are normally not reflected by the ionosphere to produce skywave effects, but instead penetrate the ionosphere and are lost to the earth. At the same time the ground wave in the u.h.f. range is so rapidly attenuated as to be of no practical value for any but the very shortest distances of transmission.

Transmission is then by means of two other components of the radiation: the direct and the ground-reflected rays, i.e., the space

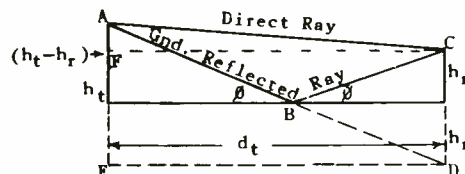


Fig. 2.—Geometry of ground-reflected and direct rays.

wave. For distances  $d_t$  large compared to the elevation  $h_t$  and  $h_r$  of the antennas, the angle  $\phi$ , Fig. 2, is very small—less than the Brewster angle. Accordingly, in normal practice vertically polarized waves as well as horizontally polarized waves have their electric field vectors reversed in phase upon reflection, so that the ground-reflected ray tends to meet the direct ray inherently  $180^\circ$  out of phase and thus to cancel it.

The difference in path length between the two rays, however, produces an additional shift in phase for the ground-reflected ray, so that the two do not cancel, and hence a signal is produced at the receiving antenna that is the vector difference between the two rays. As  $h_t$  and  $h_r$  are increased, the difference in path lengths approaches  $\lambda/2$ . For this difference in path length, the phase shift is a full  $180^\circ$  plus  $180^\circ$  owing to reflection. The total is  $360^\circ$ , or the two rays meet in phase and maximum signal is obtained.

From Fig. 2 it is evident that the length of the ground-reflected path, which is  $AB + BC$ , is the same as the straight line distance  $AB + BD$ . Since  $ABD$  is the hypotenuse of the right-angled triangle  $AED$ ;  $ED$  represents the distance  $d_t$  between antennas; and  $AE$ , the sum of the two antenna heights,  $h_t + h_r$ , it follows that

$$\begin{aligned} AD &= \sqrt{(ED)^2 + (AE)^2} \\ &= \sqrt{d_t^2 + (h_t + h_r)^2} \end{aligned}$$

The length of the direct path is  $AC$ , which is the hypotenuse of triangle  $AFC$ . Hence,

$$\begin{aligned} AC &= \sqrt{(FC)^2 + (AF)^2} \\ &= \sqrt{d_t^2 + (h_t - h_r)^2} \end{aligned}$$

The difference between the two path lengths is

$$l = AD - AC$$

$$= \sqrt{d_t^2 + (h_t + h_r)^2} - \sqrt{d_t^2 + (h_t - h_r)^2}$$

If  $(h_t + h_r)$  is very small compared to  $d_t$ , as is normally the case in practice, then it can be shown that

$$l \approx \frac{2h_t h_r}{d_t}$$

( $\approx$  means approximately equal)

\*Thus, consider  $(a + b)^2 = a^2 + 2ab + b^2$ . If  $b$  is very small compared to  $a$ , then  $b^2$  will be negligible compared to  $a^2$  and  $2ab$ , or

$$(a + b)^2 \approx a^2 + 2ab$$

From this it follows that  $\sqrt{a^2 + 2ab} \approx a + b$ . In the first square root expression in the text,  $d_t^2$  corresponds to  $a^2$ , and  $(h_t + h_r)^2$  to  $2ab$ .

Hence,

$$\frac{2ab}{2a} = b = \frac{(h_t + h_r)^2}{2d_t}$$

or

$$\sqrt{d_t^2 + (h_t + h_r)^2} \approx d_t + \frac{(h_t + h_r)^2}{2d_t}$$

Similarly,

$$\sqrt{d_t^2 + (h_t - h_r)^2} \approx d_t + \frac{(h_t - h_r)^2}{2d_t}$$

Then

$$\begin{aligned} &\sqrt{d_t^2 + (h_t + h_r)^2} - \sqrt{d_t^2 + (h_t - h_r)^2} \\ &= d_t + \frac{(h_t + h_r)^2}{2d_t} - d_t - \frac{(h_t - h_r)^2}{2d_t} \\ &= \frac{(h_t + h_r)^2 - (h_t - h_r)^2}{2d_t} \\ &= \frac{h_t^2 + 2h_t h_r + h_r^2 - h_t^2 + 2h_t h_r - h_r^2}{2d_t} \\ &= \frac{2h_t h_r}{d_t} \end{aligned}$$

The difference in path length, when measured in wavelengths, is

$$\frac{l}{\lambda} = \frac{2h_t h_r}{\lambda d_t}$$

and when measured in radians is

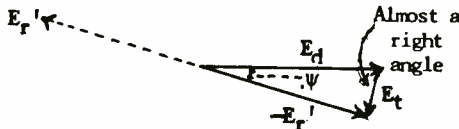
$$\psi = 2\pi \left( \frac{l}{\lambda} \right) = \frac{4\pi h_t h_r}{\lambda d_t} \quad (1)$$

If the value of  $\psi$  is desired in degrees, substitute 360 for  $2\pi$  in the above formula.

Assume that the reflection from the earth takes place with no absorption; i.e., the ground-reflected ray is equal in strength to the direct ray. In that case, if there were no difference in path length, the vectors would cancel each other, as shown by the solid lines,  $E_d$  (direct-ray vector) and  $E_r$  (ground-reflected ray) in Fig. 3(A). If



(A)



(B)

Fig. 3.—Vector relations for ground-reflected and direct rays.

there is a difference in path length with a corresponding angle of lag  $\psi$ , the ground-reflected vector will have a position shown by the dotted-

line vector  $E_r'$ . The sum of  $E_r'$  and  $E_d$ , or the resultant field strength, can be found by subtracting  $-E_r'$  from  $E_d$ . This is shown in Fig. 3(B), where  $E_r'$  is reversed in direction to give  $-E_r'$ , which is then subtracted vectorially from  $E_d$  to give the resultant  $E_t$ . It will be observed that this is the same as adding  $E_r'$  to  $E_d$  (dotted lines) in (A) of Fig. 3.

From Fig. 3(B) it can be seen that if  $\psi$  is small, the three vectors form practically a right triangle, so that

$$\begin{aligned} E_t &= (-E_r') \sin \psi = E_d \sin \psi \\ &\approx E_d \psi = E_d \frac{4\pi h_t h_r}{\lambda d_t} \end{aligned} \quad (2)$$

since  $E_r'$  and  $E_d$  are assumed equal in length (perfect reflection) and also if  $\psi$  is small, then  $\sin \psi \approx \psi$ . Thus, if the direct field strength at any point in space is known, then the resultant field strength—that which actually induces a voltage in the receiving antenna—can be found.

If the phase angle  $\psi$  is large, the more cumbersome but more accurate expression for the resultant of two vectors must be used, namely,

$$\begin{aligned} E_t &= \sqrt{E_r^2 + E_d^2 - 2E_r E_d \cos \psi} \\ &= E_d \sqrt{2 - 2\cos \psi} \end{aligned} \quad (3)$$

The intensity of the direct ray,  $E_d$ , for a half-wave dipole antenna is

$$E_d = (7 \sqrt{w})/d_t \text{ volts per meter} \quad (4)$$

where  $w$  is in watts and  $d_t$  is in meters. If Eq. (4) be substituted in Eq. (2), the resultant field



strength can be found:

$$E_t = (28\pi \sqrt{w} h_t h_r) / d_t^2 \lambda \text{ volts/m} \quad (5)$$

This equation is satisfactory for propagation over average ground, for  $(h_t + h_r)$  small compared to  $d_t$ , and for small path differences (small values of  $\psi$ , so that  $\sin \psi$  approximately equals  $\psi$  in radians). Note that  $E_t$  is not the voltage, but the electric-field intensity, i.e., volts per meter, if  $\lambda$  is in meters. ( $h_t$ ,  $h_r$ , and  $d_t$  must be in the same units, e.g., in meters.)

Suppose a half-wave dipole is employed as the receiving antenna. The current and voltage distributions on the antenna will be half-sine waves as shown in Fig. 4. The

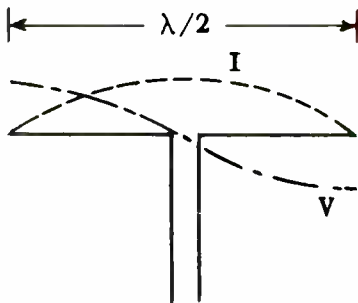


Fig. 4.—Current and voltage relations in a half-wave dipole.

average value of the half-sine wave, as averaged over a half cycle, is  $2/\pi$ . This means that if the dipole were reduced from a length of  $\lambda/2$  to  $(\lambda/2)(2/\pi) = \lambda/\pi$ , and the current and voltage were of constant peak value throughout the length of this reduced antenna, the total voltage induced in this antenna would be the same as in the actual dipole. This finally means that the effective length of a half-wave

dipole is  $\lambda/\pi$  instead of  $\lambda/2$ .

If the effective length is multiplied by the (uniform) field strength, the total induced voltage  $V_r$  is obtained. This would be equal to  $E_t \lambda/\pi$ , which becomes, upon substituting the value of  $E_t$  from Eq. (5)

$$V_r = (28 \sqrt{w} h_t h_r) / d_t^2 \quad (6)$$

where  $h_t$ ,  $h_r$ , and  $d_t$  must be measured in the same units, such as meters.

The received power can then be calculated, under the assumption, for example, that the input impedance of the tube circuit equals the impedance of the source—here the radiation resistance of the antenna. This is 75 ohms for a half-wave dipole, hence the input impedance—as viewed by the antenna—must be 75 ohms too. If the load impedance equals the source impedance, then half of the generated voltage  $V_r$  is consumed in the source (antenna), and only half, or  $V_r/2$  appears across the load.

This voltage is across 75 ohms. Hence, the received power is

$$w_r = \left(\frac{V_r}{2}\right)^2 / 75 = \left(\frac{28 \sqrt{w} h_t h_r}{2d_t^2}\right)^2 / 75$$

$$= (2.6 w h_t^2 h_r^2) / d_t^4 \quad (7)$$

where  $h_t$ ,  $h_r$ , and  $d_t$  are measured in the same units, such as meters. At this point it is desirable to discuss the foregoing equations in order to see more clearly where they apply and what they imply.

In the first place, Fig. 2 indicates that the same results can be expected if the transmitting and receiving antennas are interchanged. This is borne out by Eqs. (1), (2),

(5), (6), and (7). In all of these  $h_t$  and  $h_r$  appear in the equation as a product, which is unchanged if the numerical values of the individual factors  $h_t$  and  $h_r$  are interchanged. In broadcast service, such as f.m. and television, Eq. (5) indicates, for example, that for a given power  $w$  that is radiated, the field strength at the receiver  $E_t$  can be increased if the height of the transmitting antenna  $h_t$  is increased, even though the receiving antenna height  $h_r$  is low. From a practical viewpoint, an elevated site for the transmitting antenna will be easier and cheaper to obtain than elevated sites for all the receiving antennas.

On the other hand, in point-to-point communication both sites can be selected for optimum effect.

receiving antennas above the reflecting plane. In order to take into account the refracting effect of the troposphere (lower atmosphere), it is customary to plot this map with a radius that is  $4/3$  of the actual earth's radius. The profile should be examined carefully to determine if there is any possibility of more than one ground-reflected ray directed toward the receiving antenna. In Fig. 5 is illustrated a profile map of the region between a proposed transmitter and receiver.

From Eq. (1) the phase shift  $\psi$  of the ground-reflected wave relative to the direct ray can be calculated. Note, however, that this and all succeeding equations are simplified approximations, and assume that the heights  $h_t$  and  $h_r$  are

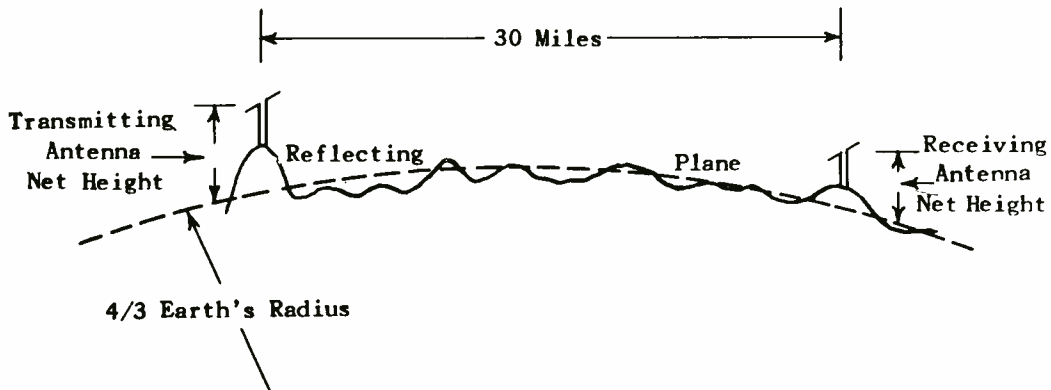


Fig. 5.—Profile map showing use of reflecting plane in calculating propagation characteristics.

Over land paths, a profile map of the intervening terrain can be drawn in order to determine the net heights of the transmitting and

small compared to the distance of transmission  $d_t$ . Such assumption is permissible in most cases encountered in practice.

If the wavelength  $\lambda$  is sufficiently small, then for given values of  $h_t$ ,  $h_r$ , and  $d_t$ ,  $\psi$  may come out to be  $180^\circ$ . In this case the resultant field strength will be a maximum. In point-to-point communication it may be possible to choose  $\lambda$ ,  $h_t$ ,  $h_r$ , and  $d_t$  to obtain this desirable result. In other words, control of the propagation is much greater in this class of service than it is in broadcasting.

A simple example will illustrate the use of Eq. (1). Suppose  $h_r = 30$  feet = 9.14 meters ( $30 \times .3048$ );  $h_t = 120$  feet = 36.6 m. The distance  $d_t$  will be chosen the maximum possible for line-of-sight transmission. This is given by the formula

$$d_t = 1.414 (\sqrt{h_t} + \sqrt{h_r}) \quad (8)$$

where  $d_t$  is in miles, and  $h_t$  and  $h_r$  are in feet.

In the above problem

$$\begin{aligned} d_t &= 1.414 (\sqrt{120} + \sqrt{30}) \\ &= 1.414 (10.98 + 5.48) \\ &= 23.3 \text{ miles} \\ &= 37,500 \text{ meters} \end{aligned}$$

The value of  $d_t$  is so much greater than  $h_t$  and  $h_r$  that all formulas apply. From Eq. (1)

$$\psi = \frac{4\pi \times 9.14 \times 36.6}{37,500 \lambda} = \frac{.1122}{\lambda}$$

Suppose the frequency is 60 mc. Then

$$\lambda = \frac{3 \times 10^8 \text{ meters}}{60 \times 10^6} = 5 \text{ meters}$$

Substituting this value of  $\lambda$  in the preceding expression, we obtain

$$\psi = \frac{.1122}{5} = .0225 \text{ radians}$$

$$= 1.29^\circ = (.0225 \times 57.3^\circ)$$

The resultant or net field strength in terms of the direct-ray field strength  $E_d$  is given by Eq. (2) as

$$E_t = E_d \sin \psi = E_d \psi = .0225 E_d$$

i.e., the net field strength is slightly over two per cent of the direct ray at 60 mc for the heights and distance chosen.

Suppose, however, the frequency was 3,000 mc,  $\lambda = 10$  cm. From Eq. (1)  $\psi$  now comes out to be  $(.1122) + (.1) = 1.122$  radians or  $64.3^\circ$ . This indicates that the ground-reflected and direct rays are more nearly in quadrature rather than in phase opposition, so that  $E_t$  may be expected to exceed  $E_d$ . For such a large value of  $\psi$  Eq. (3) rather than Eq. (2) must be used to calculate  $E_t$ . Thus,

$$\begin{aligned} E_t &= E_d \sqrt{2 - 2 \cos 64.3} \\ &= E_d \sqrt{2 - 2(.4337)} = 1.065 E_d \end{aligned}$$

For this frequency the net or resultant field strength is 6.5 per cent greater than the direct ray  $E_d$ . Furthermore, if a half-wave dipole is employed, Eq. (4) shows that for the same power  $w$ ,  $E_d$  is independent of frequency.

The above simple calculation indicates the advantage of using higher frequencies in the u.h.f. region if the antenna elevations are low. On the other hand, it must not be overlooked that if the elevations are low, the line-of-sight distance,  $d_t$ , is shortened too. Hence, even at 3,000 mc high

elevations may be required to cover large distances, and in such a case  $\psi$  may possibly approach  $2\pi$  radians ( $360^\circ$ ), whereupon complete cancellation will occur between the two components of the space wave.

However, at these frequencies  $\lambda$  is so short that a minor change

creased, too.

An example will make this clear. Let  $\lambda = 10$  cm,  $d_t = 18.34$  miles or 29,500 meters,  $h_r = 20.5$  meters, and  $h_t = 72$  meters. See Fig. 6, points T and D. The curvature of the earth has been exaggerated in this figure to bring out

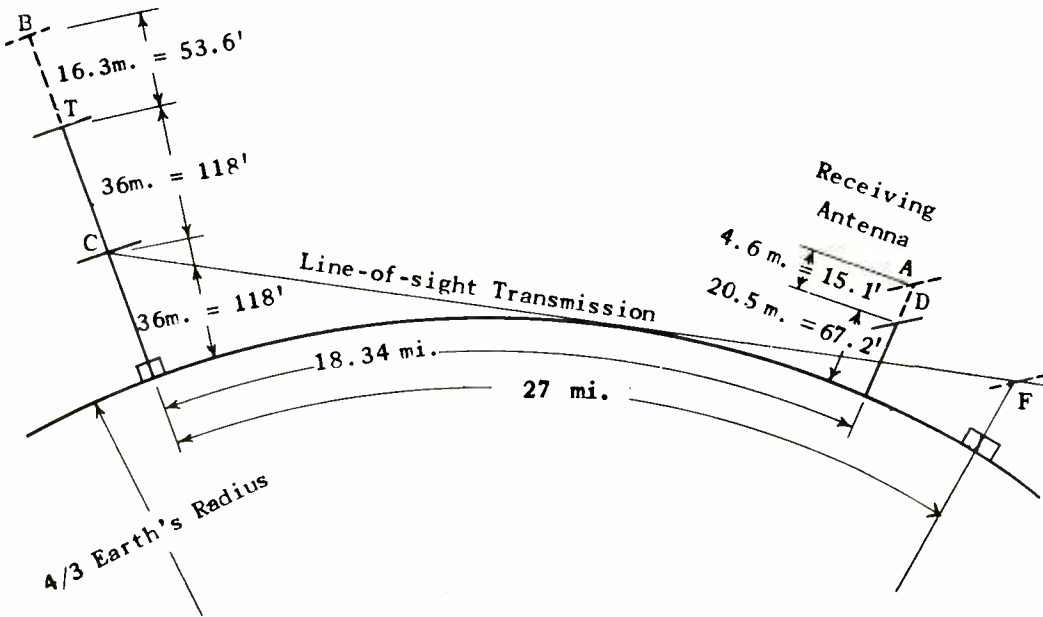


Fig. 6.—Effect of varying transmitting and/or receiving antennas on received signal.

in the actual elevation of either antenna will change  $\psi$  from  $360^\circ$  to  $180^\circ$  or  $540^\circ$ , whereupon complete reinforcement instead of cancellation will be had. In particular, if the height of either antenna is increased until  $\psi = 540^\circ$ , the line-of-sight distance  $d_t$  will be in-

better the various antenna heights. A simple check by means of Eq. (8) will show that  $d_t$  is less than the line-of-sight distance for the value of  $h_t$  and  $h_r$  chosen. Then

$$\psi = \frac{4\pi \times 20.5 \times 72}{.1 \times 29,500} = 2\pi = 360^\circ$$

This is the condition for complete cancellation:  $E_t = 0$ . To raise  $\psi$  to  $3\pi = 540^\circ$ , the quantity  $h_t h_r$  must be increased to  $1^{1/2}$  times its previous value if  $d_t$  is unchanged. This can be accomplished by increasing either  $h_t$  or  $h_r$  by the factor 1.5, or both by a smaller factor. For example, each could be increased in the same proportion by the factor  $\sqrt{1.5} = 1.225$ . This represents a 22.5 per cent increase in the height of each. On a percentage basis it is considerable, but in actual values it is only  $25.1 - 20.5 = 4.6$  meters or 15.1 feet for  $h_r$  (point A), and  $88.3 - 72 = 16.3$  meters or 53.6 feet for  $h_t$  (point B). In this case it might be preferable to increase only  $h_r$  by 50 per cent, i.e., from 20.5 meters (67.2 feet) to 30.8 meters (100.1 feet).

On the other hand, in the above problem  $d_t$  was less than the line-of-sight distance. Suppose  $h_t$  is reduced to one-half.  $\psi$  will be one-half its previous value or  $180^\circ$  instead of  $360^\circ$ . Reinforcement instead of cancellation will take place just as for  $\psi = 540^\circ$ . The value of  $h_t$  will be 36 meters = 118 feet (point C), and  $h_r$  will remain at 20.5 meters = 67.2 feet (point D). Then the line-of-sight transmission will be

$$\begin{aligned} d_t &= 1.414(\sqrt{67.2} + \sqrt{118}) \\ &= 1.414(8.2 + 10.88) \\ &= 27 \text{ miles} \end{aligned}$$

which exceeds the desired distance of 18.34 miles. At this maximum distance is shown an antenna, F, in dotted lines in Fig. 6. It is evident from this figure that the

actual antenna D is above the line-of-sight transmission of a transmitting antenna represented by height C.

In general, at these higher frequencies, line-of-sight considerations often are the determining factor rather than the interference effects between the two components of the space wave, and once the heights are chosen to give at least line-of-sight transmission, corrections can then be made to obtain the optimum signal.

Where the antenna heights are low, and the frequency not too high, then  $\psi$ , the phase shift of the ground-reflected ray, is small. In such a case the simple approximate formula for  $E_t$  is satisfactory, or its more expanded form as given by Eq. (5). The latter is based on the use of a half-wave transmitting dipole. If a similar receiving antenna is employed, Eq. (6) gives the voltage induced in the antenna, and Eq. (7) the power received in a matched load of 75 ohms.

These two equations indicate that the induced voltage and received power are independent of the frequency and wavelength, whereas the preceding discussion indicated a wide deviation in field strength, hence, in induced and received power. The answer to this apparent contradiction is that Eqs. (6) and (7) refer only to heights so low that the phase shift  $\psi$  is small, whereas the preceding discussion involved phase shifts as high as  $540^\circ$ . In practice such values can occur for fairly high antennas and very high frequencies.

One further matter is of interest at this point. It is evident from Fig. 2 that if instead of a receiving antenna at point C, a re-

reflecting object were located there, and the receiving antenna located at A adjacent to the transmitting antenna, that reception would involve transmission from A to C and thence back to A again. Thus, each path—that for the direct and that for the ground-reflected ray—is traversed twice. The angle  $\psi$  is therefore doubled, and the effect is as if  $h_t h_r$  was doubled. However,

the actual signal picked up at A depends upon the size and reflection coefficient of the object at C.

The above discussion was based on the use of half-wave dipoles. It is, however, more convenient to use directional arrays in the u.h.f. range. In practice, the physical size of the array is usually limited; i.e., the array occupies a certain area. This is called the aper-

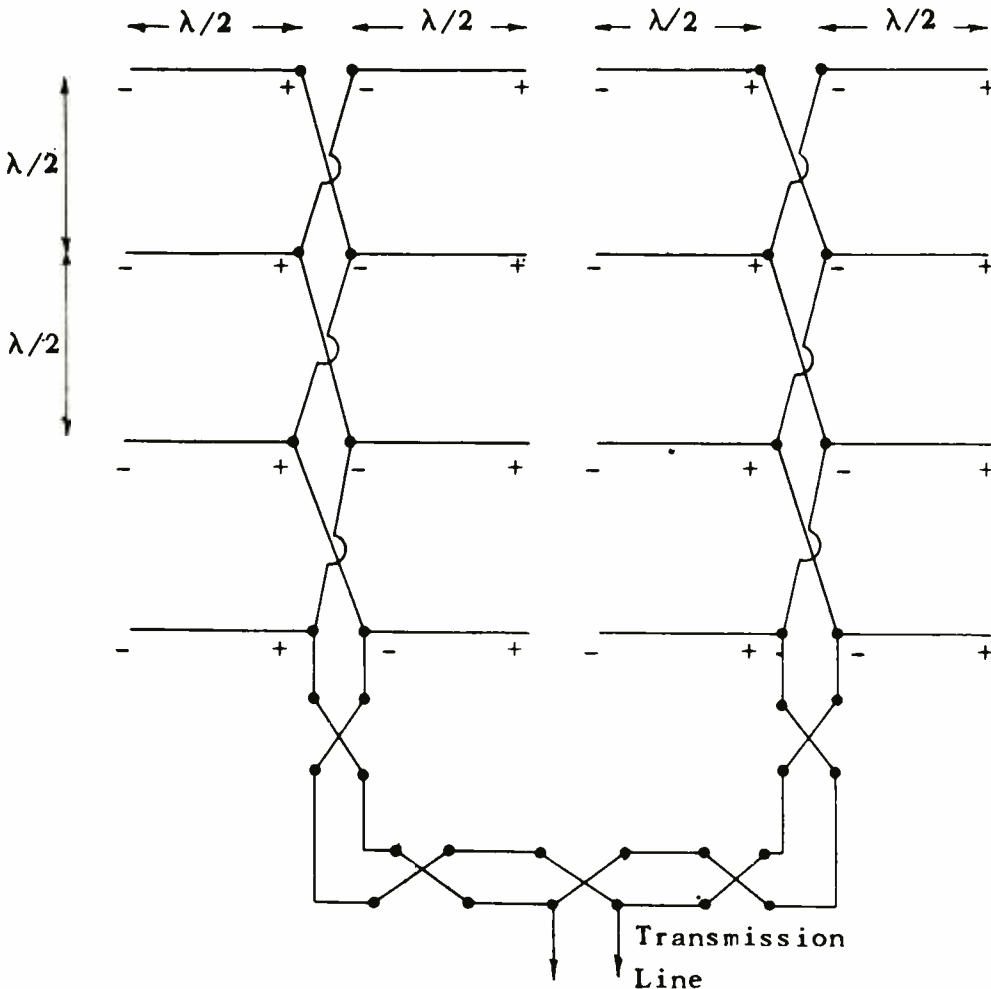


Fig. 7.—Example of an eight-element antenna array.

ture, and let it be represented as occupying  $S$  square meters.

An example of an array is shown in Fig. 7, and was discussed in a previous assignment. It transmits or receives a very narrow beam of radiation. In this array each element is  $\lambda/2$  in length. In the figure, four elements are shown along the vertical, and two along the horizontal. The vertical spacing is  $\lambda/2$ , but the spacing between horizontal elements is very small, and can be ignored.

Hence, the horizontal width of the array is  $2\lambda$ , and the vertical distance is  $(3/2)\lambda$ . At 100 mc, for example,  $\lambda$  is 3 meters, so that the array occupies a space of  $2 \times 3 = 6$  meters by  $3/2 \times 3 = 4\frac{1}{2}$  meters, and thus forms an aperture of  $6 \times 4\frac{1}{2} = 27$  square meters. This is the value of  $S$  for this array.

For 200 mc, the array would have to be composed of 4 times as many antennas to form the same size aperture, since each antenna would be half as long, and the spacing would be half as great. In the discussion that follows, it will be assumed that  $S$  is the same for all frequencies under consideration.

It will be recalled from an earlier assignment that energy is radiated from an antenna into space with the speed of light. Through any area in space there consequently passes a certain amount of energy, and the *rate* at which it passes through represents so much *power* through this area.

The amount of energy at any point of the area is proportional to the product of the electric and radiation fields,  $E$  and  $H$ , at that point (the Poynting vector), and since either field can be regarded as generating the other by its mo-

tion, the energy can be regarded as proportional to the square of either  $E$  or  $H$ . When all units are taken into account, the flow of energy, or power, is  $E^2/120\pi$  watts per square meter, assuming that  $E$  is the same at every point (uniform field intensity). Thus, a transmitting antenna of aperture  $S$  radiates an amount of power

$$P_t = SE^2/120\pi \quad (9)$$

and a receiving antenna of the same aperture absorbs a corresponding amount of power.

The increase of power absorbed by the area  $S$  of the directional array over that received by a half-wave dipole represents the power gain of the array over that of the dipole. Although the received power has been evaluated by Eq. (7) in terms of that radiated by a similar half-wave dipole, it will be preferable in the present case to evaluate the gain in terms of the field strength  $E$  in the region regardless as to how it is produced there.

The effective length of a half-wave dipole is  $\lambda/\pi$ , hence, the induced voltage is  $(E\lambda)/\pi$ . Under matched conditions half of this voltage of  $(E\lambda)/(2\pi)$  appears across the 75-ohm load; so that the received power is

$$\left(\frac{E\lambda}{2\pi}\right)^2 / 75 = \frac{E^2\lambda^2}{300\pi^2} \text{ watts}$$

The power gain of the array over that of the dipole is then

$$G = \frac{SE^2/120\pi}{E^2\lambda^2/300\pi^2} = 2.5\pi S/\lambda^2 \quad (10)$$

The gain is the same whether the antennas are used for reception or

transmission. Hence, if it is assumed that arrays of aperture  $S$  replace the dipoles at both ends of the system, the overall gain will be  $G^2$ .

Then Eq. (7) can be modified by simply multiplying it by  $G^2$  to get the received power when arrays are used at each end. Then

$$w_r = \frac{2.6wh_t^2h_r^2}{d_t^4} G^2$$

$$= 16.2\pi^2 wS^2 \frac{h_t^2h_r^2}{d_t^4\lambda^4} \quad (11)$$

where  $w$ , it will be recalled, is the power radiated from the transmitter, and  $h_t$ ,  $h_r$ , and  $\lambda$  are in the same units, say, meters, and  $S$  is in similar square units, such as square meters. If the two antenna heights are chosen equal, i.e.,  $h_t = h_r = h$ , then

$$w_r = 16.2\pi^2 wS^2 (h/d_t\lambda)^4 \quad (12)$$

Eq. (12) indicates that the received power is proportional to the fourth power of the antenna heights, and inversely proportional to the fourth power of the wavelength and also the distance.

Hence, with fixed-aperture antennas, there is a very marked advantage in going to higher frequencies, providing the same amount of power  $w$  is available at the higher frequencies. This, however, is unfortunately not the case. It will be seen later that as the frequency goes up, the power output of tubes goes down.

In using Eqs. (11) and (12) the same precautions should be employed as in using the previous equations. The former are based on the same

approximations, namely, that  $h_t$  and  $h_r$  are small compared to  $d_t$ , and that the phase shift  $\psi$  is small. The precautions are particularly to be employed in calculations at very high frequencies, where the antenna height may be relatively great in order to obtain a large line-of-sight distance, and consequently  $\psi$  may be very large. In such a case the net field strength at the receiving antenna should be calculated by Eq. (3) rather than by Eq. (2) for use in subsequent calculations.

For example, the voltage induced in a receiving dipole is still  $E_t\lambda/\pi$ , regardless of whether  $E_t$  is calculated by Eq. (2) or Eq. (3). The gain of an aperture  $S$  over a dipole is still given by Eq. (10). Consequently, the power output can still be calculated on the basis that it is  $E^2\lambda^2/300\pi^2$  watts for a dipole, and  $SE^2/120\pi$  watts for an aperture.

The previous analysis was based on a small phase angle  $\psi$ . As a result, as one goes up in frequency, the increase in phase shift for a given set of antenna heights and separation results in a practically proportional increase in  $\psi$  and hence in the field strength  $E_t$ . Consequently, Eq. (7) for half-wave dipole antennas indicates that the received energy is independent of the frequency because  $E_t$  increases with frequency just as rapidly as the effective length of the antenna decreases, and Eqs. (11) and (12) indicate that the received energy increases as the fourth power of the frequency (or as  $1/\lambda^4$ ) in the case of antenna arrays of constant aperture.

However, as one goes up above 1,000 mc or thereabouts, the phase



angle  $\psi$  becomes very appreciable for reasonable long distances of transmission, because the antenna heights must be sufficiently great to afford line-of-sight paths in accordance with Eq. (8). In this case it is usually possible to choose antenna heights such that  $\psi$  is an odd multiple of  $180^\circ$ , and maximum reinforcement of the direct ray is afforded by the ground-reflected ray. If such is the case for some particular frequency, then for a higher frequency cancellation instead of reinforcement will occur, and the field strength  $E_t$  will decrease. It will then be found that the received energy goes down as the frequency is increased.

In order to make a fair comparison when  $\psi$  is large, suppose that the antenna heights can be adjusted at each frequency to give line-of-sight transmission and also maximum reinforcement between the two components of the space wave. In that case the field strength at the receiver will be independent of frequency, i.e.,  $E_t$  will be constant.

Now suppose that a half-wave receiving dipole is employed. If the frequency is doubled, the actual and also the effective length of the receiving dipole is halved, while  $E_t$  remains constant. The induced voltage, which is equal to  $E_t$  multiplied by the effective length, will therefore be halved, and the received power  $w_r$ , which is proportional to  $E_t^2$ , will therefore be one-quarter of its previous value. In the case of an aperture of area  $S$ , the received power will be constant and equal to  $SE_t^2/120\pi$ , instead of increasing as indicated by Eqs. (11) and (12).

In short, if maximum effect

from  $\psi$  can be had at any frequency, there is a disadvantage in going to a higher frequency when a dipole receiving antenna is used, and no advantage nor disadvantage when an array of fixed aperture  $S$  is employed.

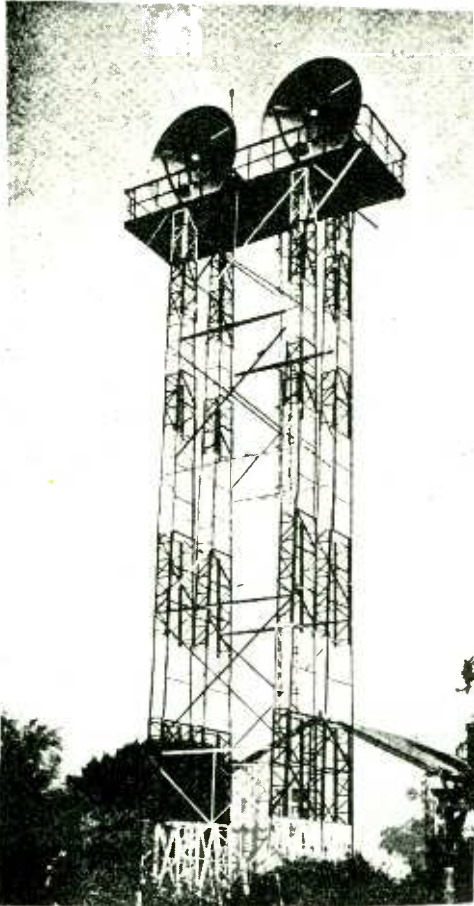
As a matter of fact, the amount of energy extracted by an antenna is from a section of the wave front that extends roughly one-quarter wavelength away from the antenna. If  $E_t$  is constant throughout this space, as assumed here, then evidently as one goes to higher frequencies, the decrease in  $\lambda$  will mean a decrease in energy extracted, particularly so in the case of a half-wave dipole. At very high frequencies the energy extracted will be so small as to be incapable of overriding the tube noise in the receiver. For this reason arrays, horns, and parabolic reflectors are employed, not only to obtain directional characteristics, but also to extract energy from a reasonable amount of space and thus increase the signal input. An example of a parabolic reflector is shown in Fig. 8 and was used in the hyper-frequency link across the English Channel between England and France.

A final point concerning interference should be noted. At the lower end of the u.h.f. region, atmospheric static is practically non-existent, but man-made interference is of importance. Thus, car ignition noises, and interference from diathermy machines and other electrical equipment can cause considerable trouble, particularly in the case of a high-grade service such as television.

As a general rule, it appears that the disturbing energy is mainly vertically polarized. This is due

to the fact that a horizontal radiator close to the earth—such as the horizontal portions of the brush leads of a sparking motor—has its

assignment on antennas.) Consequently, there is much to recommend the use of horizontal polarization for television, for the horizontal



(A)



(B)

- (A) French terminal of the hyper-frequency link across the English Channel.
- (B) A parabolic reflector used for the creation of a hyper-frequency.

*Courtesy of Electrical Communications)*

Fig. 8.—Parabolic reflectors used in u. h. f. transmission.

radiation effectively cancelled by that of its ground image, since the currents in the two flow in opposite directions. Vertical radiators, on the other hand, have a ground image whose current flow is in the same direction as the radiator, so that the effects are additive. (This has already been mentioned in the

receiving antenna will be little affected by a vertically polarized wave.

Furthermore, it has already been mentioned that in the aerial navigation services employing frequencies in the order of 100 mc, horizontal polarization is favored because it appears to be much less

affected by variations in the conductivity of the terrain, such as due to snow or rain.

At the very high frequencies, there is an absence of both atmospheric as well as man-made static. This is not surprising when one considers how difficult it is to generate such high frequencies. Very few pieces of electrical equipment are small enough to have natural resonances at the very high frequencies. However, tube noise is still present to as great an extent as at the lower frequencies, and in view of the small energy pickup, at least by a half-wave dipole, the tube noise becomes the important factor in determining how weak a signal can be handled. This will be discussed in greater detail farther on.

## CIRCUIT ELEMENTS

*TRANSMISSION LINES.*—Mention has been made that as the frequency goes up, the size of the circuit elements required for resonance decreases until ultimately they become too small to be practical. It is then that transmission lines enter favorably into the picture and begin to function as circuit elements. An important feature is that the connecting wires, such as these within the tube (from the socket pin to the tube electrodes) can be incorporated with the external line to form a continuation of it, with the result that such connections are possibly an aid rather than a hindrance to the generation of u.h.f. It is advisable at this point to review the material on transmission lines that appears in the preceding assignments on anten-

nas.

A line that is terminated in its characteristic impedance  $Z_0$  is termed a non-resonant line. The r.m.s. values of the voltage and current decrease by small amounts as one proceeds down the line, depending upon the line losses. For short lengths, the decrease is practically negligible.

When a line is not terminated in  $Z_0$ , then reflections take place at the termination, and the incident and reflected waves of voltage or current reinforce each other at some points of the line, and cancel each other at other points, thus giving rise to nodes and loops in the current and voltage.

Such effects are a maximum for complete mismatch: open- or short-circuit terminations, and for line lengths that are multiples of  $\lambda/4$ . For example, a line 10 cm in length is a  $\lambda/4$  line at 750 mc. If open-circuited at its far end then it appears essentially as a short-circuit at its near end, that is, like a series-resonant circuit. If it is shorted at its far end, it appears as an open circuit at its near end (parallel resonant circuit).

Note the appreciable length 10 cm that acts as a series-resonant circuit at the high frequency of 750 mc. An equivalent lumped L-C circuit would have impractically small circuit components, whereas the line is of reasonable length. Also its losses are much less, that is, its Q is higher than that of a lumped circuit.

Lines of  $\lambda/2$  in length behave oppositely to those  $\lambda/4$  in length, e.g., an open-circuited  $\lambda/2$  line looks like an open circuit at its near end (parallel resonant). A

line  $3\lambda/4$  in length behaves like a  $\lambda/4$  line, etc. Generally, resonant lines are  $\lambda/4$ , or at most  $\lambda/2$  in length, because the losses go up with the length (measured in wavelengths) and the Q goes down.

*Q OF A RESONANT LINE.*—In ordinary circuit theory, the Q of an inductance coil, for example, is the ratio of the reactance of the coil to its resistance, or  $Q = \omega L/R$ .

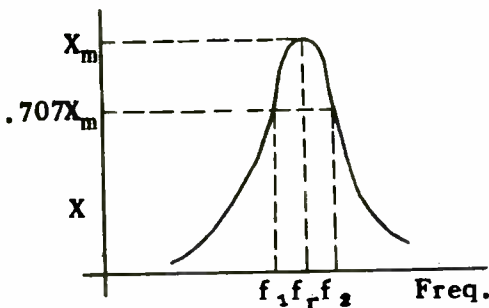


Fig. 9.—Resonance curve, showing method of measuring the Q of the resonant circuit.

For an L-C circuit it can be shown to depend upon the sharpness of the resonance curve. This is illustrated by Fig. 9.

Let  $f_r$  be the resonant frequency. Also let  $f_1$  and  $f_2$  be two frequencies at which the reactance is  $1/\sqrt{2}$  or .707 that at resonance, denoted by  $X_m$ . For a circuit of normally high Q,  $f_1$  is approximately as much below  $f_r$  as  $f_2$  is above it, i.e.,  $(f_r - f_1) = (f_2 - f_r)$ . The Q of the circuit can be shown to be

$$Q = \frac{f_r}{2(f_r - f_1)} = \frac{f_r}{2(f_2 - f_r)} \quad (13)$$

The closer  $f_1$  and  $f_2$  are to  $f_r$ , the higher is the Q, and the sharper is the resonance curve.

In the case of an actual resonant line that has resistive losses, such as a  $\lambda/4$  line shorted at its far end, the resonance curve does not go off to infinity, but has more nearly the shape shown in Fig. 9, i.e., it has a finite peak. Accordingly, an expression for its Q can be found on the basis of Eq. (13). Thus

$$Q = \frac{2\pi f_o Z_o}{cR} = \frac{2\pi Z_o}{R\lambda_o} \quad (14)$$

where  $Z_o$  is the characteristic impedance of the line.

$f_o$  is the frequency at which it is resonant as a quarter-wave line.

$\lambda_o$  is the corresponding wavelength in meters.

$c$  is the velocity of light =  $3 \times 10^8$  meters per second.

$R$  is the resistance per loop meter.

The resistance R of the line depends upon its construction, and exceeds the d.c. resistance of the conductors owing to skin effect, which forces the current to the surface of the conductors and thus increases the resistance. For a two-wire line, composed of two copper conductors each having a radius of  $a$ , in meters, see Fig. 10, the resistance is given by the formula

$$R = 8.32 \frac{\sqrt{f}}{a} \times 10^{-8} \Omega/\text{loop meter} \quad (15)$$

where  $f$  is the operating frequency.

If the dimensions are given in inches,

$$R = \frac{\sqrt{f}}{a} \times 10^{-6} \Omega \text{ per loop foot} \quad (15a)$$

where  $a$  is in inches.

For a coaxial line

$$R = 4.16 \times 10^{-8} \times \sqrt{f} \times \left( \frac{1}{a} + \frac{1}{b} \right) \Omega/\text{loop meter} \quad (16)$$

where  $a$  and  $b$  are in meters (see Fig. 11). Also

$$R = 5\sqrt{f} (1/a + 1/b) \times 10^{-7} \text{ ohms per loop ft.} \quad (16a)$$

when  $a$  and  $b$  are in inches.

It will be noted that  $R$  varies as the square root of the frequency.

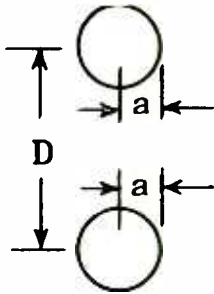


Fig. 10.—Important dimensions for a two-wire line.

Hence, substitution in Eq. (14) of the appropriate formula (15), (15a), (16) or (16a) gives rise to a  $\sqrt{f}$  term in the denominator. The frequency also appears to the first

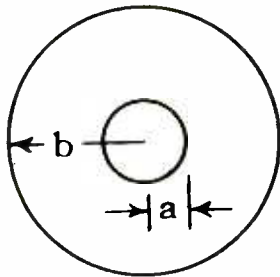


Fig. 11.—Important dimensions for a coaxial line.

power in the numerator. Dividing  $\sqrt{f}$  of the denominator into  $f$  of the numerator produces  $\sqrt{f}$  in the numerator. This means that  $Q$  varies as the square root of  $f$ , i.e., increases with  $f$ . Thus, if the frequency is increased *four-fold*, the  $Q$  is *doubled*.

As a result, resonant transmission lines are particularly valuable at high frequencies because their  $Q$  is much higher than that of a practical lumped circuit, and at the same time the quarter-wave line becomes sufficiently small in physical size to be practical. It will be instructive to evaluate the  $Q$  of some quarter-wave lines. For this purpose the expression for the characteristic impedance of a line must be given.

For a two-wire line this is (refer to Fig. 10)

$$Z_0 = 276 \log \frac{D}{a} \text{ in ohms} \quad (17)$$

Since only the ratio of  $D$  to  $a$  is involved, Eq. (17) requires only that  $D$  and  $a$  be measured in the same units—*inches or meters, etc.*

For a concentric line (ignoring the effect of the dielectric spacers)

$$Z_0 = 138 \log b/a \quad (18)$$

where again  $b$  and  $a$  (refer to Fig. 11) have only to be measured in the same units.

Consider now a copper two-wire quarter-wave line having the following constants:

$$a = 0.5 \text{ inch}$$

$$D = 2 \text{ inches}$$

$$f = 300 \text{ mc}$$

It is desired to calculate the  $Q$  of this line. First calculate  $Z_0$ .

$$\begin{aligned} Z_0 &= 276 \log 2/.5 = 276 \log 4 \\ &= (276) (.6021) = 166 \text{ ohms} \end{aligned}$$

The wavelength corresponding to 300 mc is  $3 \times 10^8 \div 300 \times 10^6 = 1$  meter  $= \lambda_0$ . From Eq. (15a),

$$\begin{aligned} R &= \frac{\sqrt{3 \times 10^8}}{.5} \times 10^{-6} \\ &= .0346 \text{ ohm per foot} \\ &= .0346 \times 3.28 \\ &= .1135 \text{ ohm per meter} \end{aligned}$$

Then

$$Q = \frac{2\pi \times 166}{.1135 \times 1} = 9,180$$

A  $Q$  of 500 is considered very good for lumped circuits, so that it is evident that the quarter-wave line has a very high  $Q$  indeed.

A similar example can be worked out for a concentric line. Suppose this has an inner conductor of .5-inch radius too, and an outer conductor of  $3.6 \times .5 = 1.8$  inches radius. The reason for using the factor 3.6 is that the losses of a coaxial cable are at a minimum when the ratio of outer to inner conductor is 3.6. Similarly, it will be noted above for the two-wire line that the ratio  $D/a$  is four. This is about the optimum for a two-wire line and gives the highest  $Q$ .

The characteristic impedance is

$$\begin{aligned} Z_0 &= 138 \log 3.6 = 138 \times .5563 \\ &= 76.8 \text{ ohms} \end{aligned}$$

Also

$$R = 5\sqrt{3} \times 10^8 (1/.5 + 1/1.8) \times 10^{-7}$$

$$\begin{aligned} &= .0221 \text{ ohm per loop foot} \\ &= .0221 \times 3.28 \\ &= .0725 \text{ ohm per loop meter} \end{aligned}$$

Then

$$Q = \frac{2\pi \times 76.8}{.0725 \times 1} = 6,650$$

It will be noted that the  $Q$  is actually less for the concentric line than it is for the two-wire line. This is because the concentric line has inherently a lower characteristic impedance. There are other factors, however, that must be taken into account. For example, a two-wire line radiates appreciable amounts of energy, particularly at the higher frequencies, whereas a coaxial line does not, particularly when shorted at the far end. On the other hand, a two-wire line is easier to adjust, i.e., to make changes in its spacing or in its length to vary respectively its characteristic impedance or resonant frequency.

*SHORT- AND OPEN-CIRCUITED LINES.*—In general, short-circuited lines are preferred to open-circuited lines because of the radiation losses from the open-end of the latter and possibility of coupling to other circuit elements. Nevertheless, open-circuited concentric lines are feasible if the outer radius is below the cutoff frequency of the equivalent wave guide (to be explained later), and the outer conductor extends a short distance beyond the inner one.

Completely to short-circuit a line, it is necessary to short circuit all of the electric field lines existing between the conductors. However, it is satisfactory merely to cap the end of a concentric cable with a copper disc that makes good

contact with the outer and inner conductors, and in the case of a two-wire line, to use a disc of copper, as in Fig. 12, that is, whose

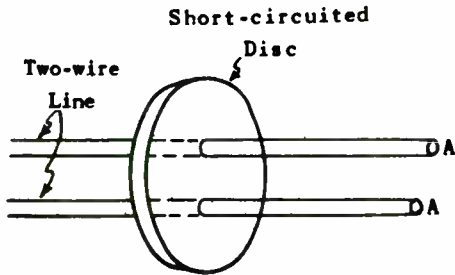


Fig. 12.—Method of short-circuiting a two-wire line.

diameter is three or four times the spacing between wires.

A further refinement, if a sufficient amount A-A projects beyond the short circuit, is to add another shorting disc a distance  $\lambda/4$  behind the first disc. This makes the impedance of portion A-A appear as practically an open circuit at the location of the main shorting disc, and thus prevents an appreciable current from being set up in it by induction from the section to be used. This in turn prevents the unused portion from affecting the impedance of the other section.

If a shorting bar is used on a two-wire line, as in a Lecher wire system, the short-circuiting will not be as complete as for the disc shown in Fig. 12, and the Q of the line will not be as high, but the line may nevertheless be quite satisfactory for wavelength measurements, etc., where too high a Q gives too sharp a resonance peak and makes its detection difficult.

*DEPTH OF PENETRATION.*—Before

discussing further properties of lines, it will be well to note the depth of material through which high-frequency currents flow. Consider a circular conductor as shown in Fig. 13, through which a high-frequency current is flowing. The current sets up circles of flux around the conductor as shown by the broken lines. Note that central

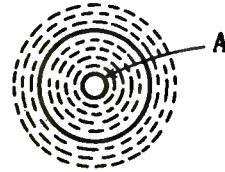


Fig. 13.—Flux in a conductor produces skin effect.

section A of the conductor is surrounded by more circles of flux than the surface of the conductor.

Since the inductance of a circuit, or portion thereof, is determined by the amount of flux the current through that portion can establish, it is evident that section A of the conductor will have more inductance and hence more inductive reactance than an annular (ring-like) section at the surface.

The voltage drop per unit length of the conductor must be the same for all sections since they are effectively all in parallel. Let its value be E. Then

$$E = IX_L$$

where I is the current through the section of the conductor, and  $X_L$  is the reactance of the section. If one section has a higher reactance than another section, the current through it must be less

than that through the other. As a consequence, the current through the center A of the conductor is far less than that on the surface, and this effect becomes more marked as the frequency and hence difference in reactance increases.

At frequencies above one megacycle, the current flow is confined mainly to the surface, and tapers off rapidly from its maximum value there to practically zero at the center according to an exponential law. The depth of penetration is defined as the thickness of a surface shell that has the same resistance to d.c. as the entire conductor cross section has to the u.h.f. a.c. This does not mean that no current flows below this depth. However, if the actual conductor thickness is, say, four times the depth of penetration, then it is of ample thickness to carry the current with substantially the same losses as a conductor of infinite thickness.

The depth of penetration for copper is given by

$$S = \frac{0.0664}{\sqrt{f}} \text{ meters} = \frac{2.61}{\sqrt{f}} \text{ inches} \quad (19)$$

where  $f$  is the frequency in cycles per second. It will be instructive to employ this formula in calculating one or two examples.

1. An iron chassis for a transmitter is to be copper-plated to function as a highly conductive coating. The operating frequency of the transmitter is 1 mc. Calculate the depth of penetration and form an estimate as to the thickness of plating required.

$$S = \frac{2.61}{\sqrt{10^6}} = \frac{2.61}{10^3} = .00261 \text{ inches}$$

or 2.6 mils

(A mil is one-thousandth of an inch.) If the copper coating is about  $4 \times 2.6 = 10.4$  mils or a little over .01 inch, very little current should flow in the iron, and hence this copper-clad chassis should be as good as an all-copper chassis. It is to be noted, however, that a plating .01 inch thick is rather heavy.

2. Suppose the operating frequency is 1,000 mc. Then

$$S = 2.61/\sqrt{10^9} = \frac{2.61}{3.16} \times 10^{-4}$$

$$= 82.6 \times 10^{-6} \text{ inches}$$

The depth of penetration is roughly 80 millionths of an inch! A coating about  $4 \times 80 = .32$  mil would be sufficient. For this reason, a thin film of silver plate, for example, on a base metal such as iron, will function just as well as a solid silver conductor. At u.h.f. one seldom has to concern himself with the thickness of the coating. It is generally far in excess of that required by Eq. (19).

It is to be noted that some correction is necessary for the case where the bend in the metal is of a radius less than the skin depth. This will be encountered only in the case of machined, sharp corners rather than in a bent-up sheet.

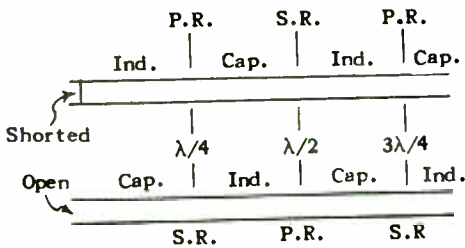
*FURTHER REMARKS.*—The fact that the current flows near the surface of the conductor indicates that the resistance of a conductor cannot be decreased by increasing the cross-sectional area of the conductor, but rather by increasing its surface, i.e., the perimeter of the cross section, which can be hollow.

The fact that a concentric line has maximum  $Q$  when  $b/a = 3.6$  means that if  $a$ , for example, is



chosen, then  $b$  should be 3.6  $a$  for maximum  $Q$ . If  $a$  is made ten times as great, then  $b$  will also be increased ten times, and the new line will have a resistance per unit length one-tenth as great as per Eqs. (16) and (16a). The characteristic impedance  $Z_0$ , however, depends upon the ratio  $b/a$  and not upon their actual values, so that  $Z_0$  will remain 76.8 ohms. Therefore, Eq. (14) shows that the  $Q$  of the larger line will be ten times as great. Thus, to increase the  $Q$  of the line, use larger values for  $a$  and  $b$ , and maintain their ratio at 3.6. The values for  $a$  and  $b$  must not be so great, however, that the connections thereto and any short-circuiting disc become of appreciable impedance themselves. Roughly, the diameter of the outer conductor of a concentric line, or the separation of a two-wire line, should be a fraction of a wavelength.

Another point to note is that a low-loss line that is not a multiple of  $\lambda/4$  in length acts like a



S.R. = Series Resonance  
P.R. = Parallel Resonance

Fig. 14.—Variation in reactance with length, for an open and a shorted line.

capacitive or inductive reactance of high  $Q$ . The variations of the reactance for an open- and short-

circuited line with length (or frequency) are shown in Fig. 14. Some uses of such elements will be given subsequently.

**NON-RESONANT LINES.**—It was stated previously (as well as in an earlier assignment) that when a line is terminated in its characteristic impedance, no reflections take place at the termination, and the line behaves exactly like a line of infinite length. The magnitude of the current and of the voltage remains constant all along the line (if the latter has no losses) or decreases exponentially with distance from the generator end if the line has losses. There are no nodes or loops either for the current or the voltage anywhere along the line; the impedance looking into the line is  $Z_0$ , the characteristic impedance, regardless of the length of the line. It is said to be *non-resonant*.

It follows, therefore, that such a line will not appear to be reactive for lengths between even and odd multiples of  $\lambda/4$  and resistive at multiples of  $\lambda/4$ . At radio frequencies the characteristic impedance is practically  $\sqrt{L/C}$ , where  $L$  and  $C$  are the inductance and capacity per unit length. This quantity— $\sqrt{L/C}$ —is a pure resistance. Hence, a line so terminated will appear to have this value of resistance regardless of its length.

In a *resonant* line the current and voltage have loops and nodes (maxima and minima) at intervals of  $\lambda/2$  along the line with the nodes of one  $\lambda/4$  distance from the nodes of the other. The losses of the line vary as the square of the current (conductor resistance and radiation resistance) and as the square of the voltage (dielectric

losses). These losses are higher in a resonant line than in a non-resonant line because of the larger current and voltage values at the loops in the former.

As a consequence, a non-resonant line is preferred when its purpose is merely to transmit power from one point to another, as it does so with a minimum of loss. A resonant line is used where one wishes to obtain reactances (capacitive or inductive) at high frequencies, or series or parallel resonance, as explained in the preceding section.

The property of a non-resonant line that its input impedance is equal to its characteristic impedance regardless of length is a valuable one. Thus, as a simple example, suppose that a dipole antenna, Fig. 15, is to be fed from a transmitter located at a distance

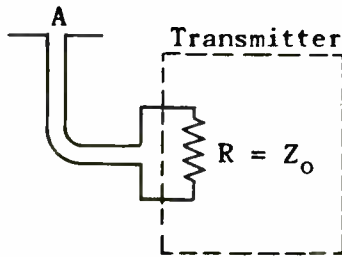


Fig. 15.—Terminating a line in its characteristic impedance makes it non-resonant regardless of its length.

from the antenna. The dipole is like a half-wave resonant line, corresponding to an open-circuited quarter-wave two-wire line, as explained in an earlier assignment. As such it should exhibit zero resistance at its center A, but owing to the losses in the antenna (prin-

cipally radiation, which is desired from the antenna) it exhibits at A a resistance of 75 ohms. This is its so-called radiation resistance.

The transmission line feeding the antenna can be designed to have a characteristic impedance of 75 ohms. Thus, suppose a concentric line is employed, and a No. 10 inner conductor is used. It has a diameter of 0.1 inch. From Eq. (18),

$$Z_0 = 138 \log b/a = 75$$

$$= 138 \log b/.05$$

or

$$\log b/.05 = 75/138 = .543$$

$$b/.05 = \text{antlg } .543 = 3.49$$

$$b = .05 \times 3.49 = .175''$$

This line can be of any desired length, and when the antenna is connected to it, it will be non-resonant. In short, so do the distributed capacity and inductance interact that so far as the transmitter is concerned, it sees a pure resistance of 75 ohms for any length of line.

On the other hand, if the line were not designed so that its characteristic impedance were equal to the radiation resistance of the antenna, i.e., merely a pair of wires connected between the transmitter and the antenna, then the impedance that the transmitter would see would be partly reactive, and of a value depending upon the length of the line. The result would be that not only would the line losses be increased, but the reactance appearing at the transmitter end would tend to detune the latter's tank circuit and require considerable

adjustment for each value of line length.

Even when matched, however, a transmission line has losses owing to the resistance of its conductors and the dielectric losses. For the ordinary line that has mainly air for its insulation the principal loss is that of conductor resistance. Expressed in db, this is, in general, for a *terminated non-resonant line*,

$$\text{db power loss} = \frac{8.686 Rl}{2Z_0} \quad (20)$$

where  $R$  = the series resistance of the line *per foot*.

$l$  = the length of the line in feet.

$Z_0$  = the characteristic impedance of the line in ohms.

It will be recalled, however, that  $R$  is a function of the type of line and conductor size, as indicated previously by Eqs. (15), (15a), (16) and (16a).

Hence, the attenuation in db per meter for a *two-wire line* may be written

$$10 \log \frac{\text{Power out}}{\text{Power in}} = \frac{(1.3)(10^{-9})\sqrt{f}}{a \log_{10} D/a} \text{ db/meter} \quad (21)$$

where  $a$  and  $D$  are in meters (see Fig. 10).

For a concentric line the attenuation is

$$\frac{(1.3)(10^{-9})\sqrt{f}}{\log_{10} b/a} \left( \frac{1}{a} + \frac{1}{b} \right) \text{ db/meter} \quad (22)$$

where  $a$  and  $b$  are in meters (see Fig. 11).

As an example, consider the concentric line calculated above. What is its attenuation for 100 feet at 400 mc? From Eq. (22),

$$\begin{aligned} \text{db/meter} &= \left[ \frac{(1.3)(10^{-9})\sqrt{400 \times 10^6}}{\log .175/.05} \right. \\ &\quad \left. \left( \frac{1}{.05 \times .0254} + \frac{1}{.175 \times .0254} \right) \right] \\ &= .0484 \text{ db/meter} \\ &= .0484 \div 3.28 \\ &= .01475 \text{ db/foot} \end{aligned}$$

For 100 feet, the total db loss is  $.01475 \times 100 = 1.475$  db.

Suppose the input power  $P_1$  = 10 watts. Then the output power  $P_0$  can be found as follows:

$$10 \log P_0/P_1 = -1.475$$

or

$$10 \log P_1/P_0 = +1.475$$

$$P_1/P_0 = \text{antilog } 1.475/10$$

$$= \text{antilog } .1475$$

$$= 1.405$$

then

$$1.405 = 10/P_0$$

$$P_0 = \frac{10}{1.405} = 7.12 \text{ watts}$$

$$\text{Power lost} = 10 - 7.12 = 2.88 \text{ watts}$$

It will be observed that the losses are relatively small for 100 feet of transmission.

*THE LINE AS A TRANSFORMER.*—The quarter-wave line has a further valuable property: it can act similar to a transformer in matching two unlike impedances. Thus, suppose an impedance  $Z_1$  (Fig. 16) is

connected to a quarter-wave line of characteristic impedance  $Z_0$ . As

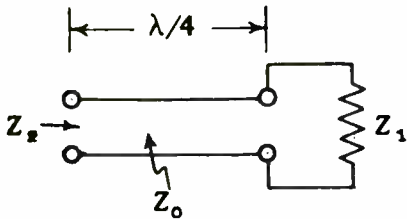


Fig. 16.—Use of a quarter-wave line to match two impedances.

viewed from the other end of the line, it appears as an impedance  $Z_2$  of value

$$Z_2 = \frac{Z_0^2}{Z_1} \quad (23)$$

or

$$Z_0 = \sqrt{Z_1 Z_2} \quad (24)$$

Eqs. (23) and (24) enable the engineer to build a line to match one impedance to another. For example, suppose it is desired to have a resistance of 800 ohms appear as 200 ohms. Then  $Z_1 = 800$  ohms, and  $Z_2 = 200$  ohms. From Eq. (24)

$$Z_0 = \sqrt{800 \times 200} = 400 \text{ ohms}$$

The impedance transforming properties of a quarter-wave line are of great utility, especially when combined with some of the other properties of a line.

**APPLICATIONS.**—A few examples, together with calculations, will be given of the use of lines in actual circuits. In Fig. 17(A) is shown a lumped circuit type of oscillator. In Fig. 17(B) is shown a shorted quarter-wave resonant line counterpart of the former oscillator.

In the case of the line oscillator,  $C_1$  acts as an a.c. short circuit but permits the plate d.c. potential to be different from that of the grid. It will also be noted that no r.f. choke is required, since the "B" supply connection is at a point of low r.f. potential.

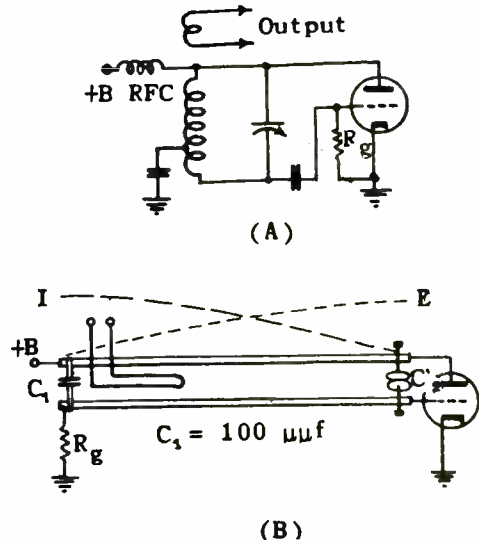


Fig. 17.—Lumped tank circuit and its transmission-line equivalent.

Indeed, at ultra-high frequencies it is rather difficult to build a lumped inductance whose distributed capacity is low enough to permit it to function as such. Note further condenser  $C_2$ . This is used to adjust the line to resonance over a narrow range of frequencies.

In addition to  $C_2$  there are the interelectrode capacities of the tube shunting the line. These also serve to establish ground with respect to the two sides of the line. Thus, the plate-to-cathode

capacity and the grid-to-cathode capacity place the two sides of the line at definite potentials with respect to the cathode and hence with respect to ground. They thus correspond to the tapped-condenser of the usual Colpitts circuit.

The use of a line instead of a lumped circuit permits elements of reasonably large size and of very high  $Q$ , to be used as has been indicated. Therefore, a line is of value for a tank circuit because its high  $Q$  or selectivity provides very good frequency stability. A quartz crystal is of value for this purpose at low frequencies, such as in the standard broadcast band, because of its exceptionally high  $Q$ . This is due to the fact that mechanical systems inherently have a high  $Q$ . But for u.h.f. stabilization, the crystal would have to be so small as to be impracticable. Fortunately, resonant lines become feasible in this range and take over the role of stabilizing the oscillator frequency very nicely. An example of their use will follow shortly.

In passing, it is to be noted that in order that the  $Q$  be high it is important that very little load be coupled to the resonant circuit.

*Shortening of Lines.*—It is evident that the presence of  $C_2$  and the tube capacities require a line that serves as the inductance of the resulting tank circuit. A shorted line less than  $\lambda/4$  will function as an inductance, as explained previously. The length of line required depends upon the capacity with which it is to tune, and also upon its own characteristic impedance and the operating frequency.

In Fig. 18(A) is shown a short-

ed line section that is to tune with a given capacitor  $C$  at some frequency  $f = \omega/2\pi$ . In analyzing the problem, the capacitor can be replaced by an open-circuited line less than  $\lambda/4$  in length, since this has a capacitive reactance too.

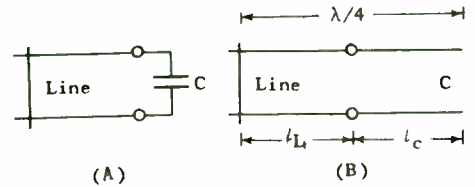


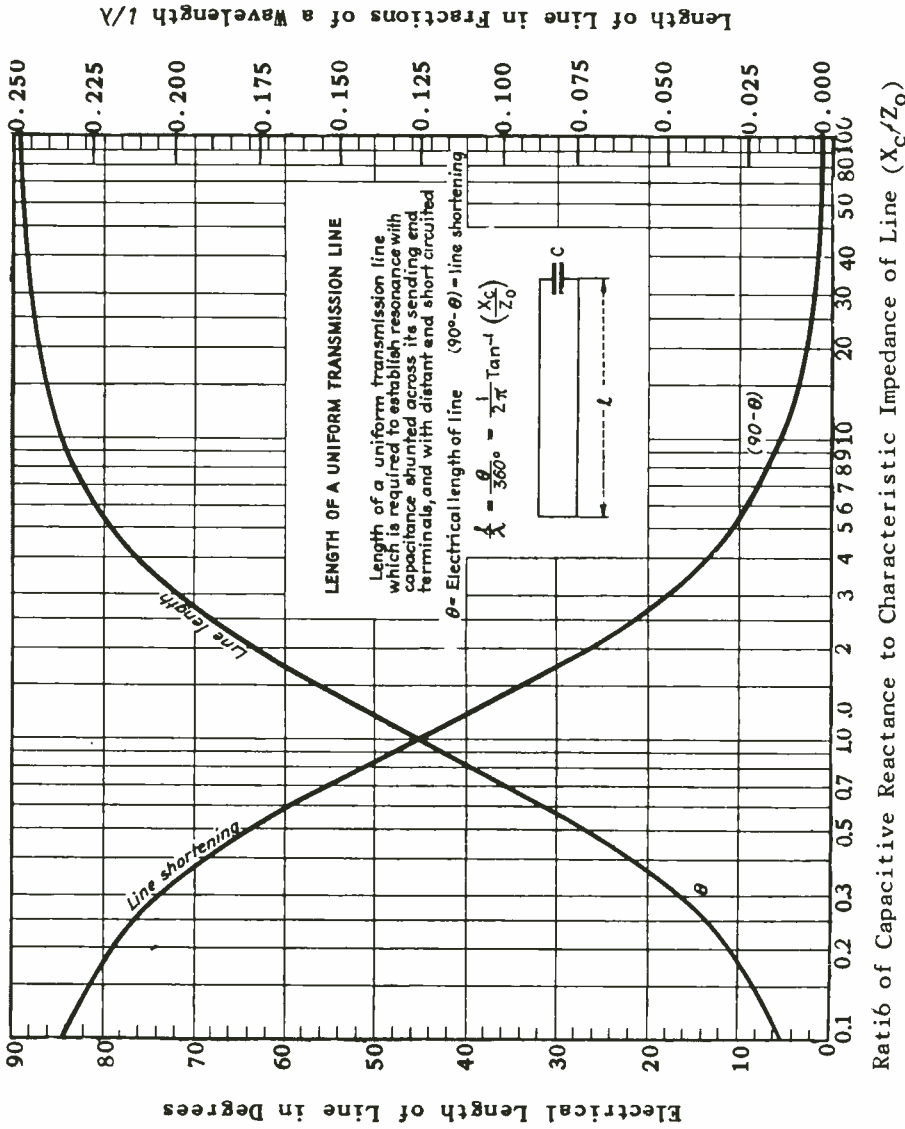
Fig. 18.—Use of a capacitor to decrease the length of a resonant line.

Thus, the actual line and capacitor can be replaced by an equivalent, longer line. This is shown in Fig. 18(B). The total length of the actual line  $l_L$  plus the hypothetical portion  $l_C$  that replaces  $C$  must clearly be  $\lambda/4$  in length in order that parallel resonance occurs.

The length  $l_C$  is found from the following formula:

$$X_c = \frac{1}{\omega C} = \frac{Z_0}{\tan\left(\frac{2\pi l_c}{\lambda}\right)} = Z_0 \cot\left(\frac{2\pi l_c}{\lambda}\right) \quad (25)$$

i.e.,  $l_c$  is given in terms of the reactance  $X_c$ , of the condenser ( $= 1/\omega C$ ), the characteristic impedance  $Z_0$ , and the wavelength of the line. Thus, once  $l_c$  is found, it can be subtracted from  $\lambda/4$  to give the length  $l_L$  of actual line required to tune with the actual capacitor  $C$ . However, normally one is given only  $C$  and the frequency of operation. Eq. (25) indicates that  $Z_0$  must also be known before  $l_c$  can



**ELECTRONICS REFERENCE SHEET**  
 (Courtesy Electronics.)

Ratio of Capacitive Reactance to Characteristic Impedance of Line ( $X_c/Z_0$ )

Fig. 19.—Graphs giving the length of a shorted line that will resonate with a given capacitance across its input terminals.

be found and then  $l_L$ .

Since  $Z_0$  is not fixed by any of the requirements of the problem as it ordinarily arises, one can choose  $Z_0$  as one pleases. Usually one desires a line  $l_L$  to represent an inductance with as high a Q as possible.

It has been indicated that minimum losses and maximum Q are obtained for a concentric line if  $b/a = 3.6$ , and for a two-wire line if  $D/a \cong 4$ . These spacings also determine  $Z_0$  for the line. Thus, for a concentric line  $Z_0$  will be 76.8 ohms, and for a two-wire line  $Z_0$  will be 166 ohms. Therefore, these values for  $Z_0$  should normally be used in Eq. (25) to determine  $l_c$  and then, by subtraction from  $\lambda/4$ ,  $l_L$ .

Under certain conditions, however, it may be advisable to choose a different value of  $Z_0$ . For example, if a lower value of  $Z_0$  is chosen, the required length of line will be closer to  $\lambda/4$ , which may be of some value at very high frequencies where  $\lambda$  is small. On the other hand, the greatest change of length for a given change in capacitive reactance occurs when  $X_c = Z_0$ . This means that the line is least critical in adjustment. However, this value of  $Z_0$  may require unusual spacing of the conductors. Hence, the values indicated previously that give maximum Q are generally preferable for  $Z_0$ .

Eq. (25) can then be solved for  $l_c$  in terms of  $X_c$ ,  $Z_0$ , and  $\lambda$ . However, to avoid computation this equation has been plotted in the form of  $l_c$  versus  $X_c/Z_0$  as is indicated in Fig. 19. The length of the actual line that will tune with the given capacitor is then  $\lambda/4 - l_c = l_L$ , as stated above.

This has also been plotted in Fig. 19\*. In the figure the angle  $\theta$  in degrees is equal to  $360 \times l/\lambda$ . Thus the left-hand ordinate scale gives the electrical length of the line as measured in degrees, and the right-hand scale gives the length as measured in wavelengths:

As an example of its use, suppose it is desired to tune a capacitor of 10  $\mu\text{mf}$  with a line at 300 mc ( $\lambda = 1$  meter). Suppose a concentric line of  $Z_0 = 76.8$  ohms is employed.  $X_c = 1/(2\pi \times 300 \times 10^6 \times 10 \times 10^{-12}) = 53$  ohms. Then  $X_c/Z_0 = 53/76.8 = .69$ . From Fig. 19 it is found that the line length is  $34.5^\circ$  or  $.0957\lambda$ . This is considerably less than  $.25\lambda$ , i.e., a 10- $\mu\text{mf}$  condenser represents at 300 mc a line  $55.5^\circ$  long or  $(.25 - .0957) = .1543\lambda$ . If the concentric line were built to have a lower  $Z_0$ , such as 53 ohms ( $= X_c$ ), then the line length would be  $\lambda/8$  or  $45^\circ$  long.

*Calculation of Line Impedance.*—The shorted line and capacitor form a parallel resonant circuit whose impedance at the capacitor end is high. If there were no losses the impedance would be infinite. Although the capacitor can be made to have very low losses, the line will have at least a resistance loss which is fixed by the material (copper) and conductor radius and spacing as shown by Eqs. (15) or (16). These losses reduce the impedance and also the Q from infinity down to a finite value. This in turn reduces the frequency stability of the associated oscillating tube.

It would therefore appear ad-

\*Taken from "Graphs for Transmission Lines," by B. Salzberg, *Electronics*, Jan. 1942; McGraw-Hill Publishing Co.

visible to use a maximum amount of capacitance and minimum length of shorted line. This, however, is not the case. In Fig. 20 is shown

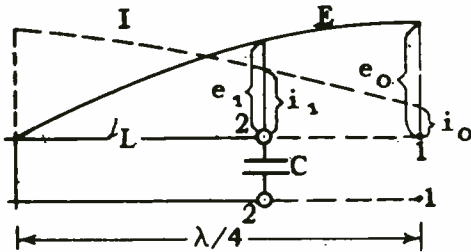


Fig. 20.—Current-voltage relations in a shorted line tuned with a capacitor to form an equivalent quarter-wave shorted line.

once again the line and associated condenser  $C$ , as well as the open-circuited line that is equivalent to  $C$  (in dotted lines). Above it are shown the (approximately) sinusoidal current  $I$  and voltage  $E$  distribution along the line.

At the open end (terminals 1-1) the current is not zero, but has a value of  $i_0$  owing to the losses in the line, while the voltage has some peak value—call it  $e_0$ . The impedance seen at 1-1 is  $Z_m = e_0/i_0$  and is finite instead of infinite in magnitude. However, at the actual terminals 2-2, the current is greater or  $i_1$ , and the voltage is less or  $e_1$ .

The impedance is therefore much less or  $Z_1 = e_1/i_1$ . This illustrates another very valuable impedance transforming property of a line, namely, that of a  $\lambda/4$  line shorted at one end and having an impedance connected across the line at one point, while the impedance across the line is measured at an-

other point. In this case the former impedance is that seen at the open end (of the hypothetical extension of the actual line) and is due to the losses of the line rather than due to an actual resistance across terminals 1-1. The impedance that can be physically measured, however, is that at terminals 2-2, at a distance from the shorted end of  $l_L$ . The ratio of these impedances is

$$\frac{Z_1}{Z_m} = \left( \frac{\sin \frac{360 l_L}{\lambda}}{\sin 90^\circ} \right)^2$$

$$= \sin^2 \frac{360 l_L}{\lambda} \quad (26)$$

Thus, as  $C$  is increased and  $l_L$  thereby shortened,  $Z_m$  increases because less  $l_L$  means less losses and a higher  $Q$ . But  $Z_1$ , the impedance seen at the actual terminals 2-2, goes down when calculated by Eq. (26). An involved analysis by Nergaard and Salzberg\* indicates that maximum impedance is obtained when  $l_L$  is practically one-quarter wave long and  $C$  is zero. If  $C$  is not zero, then the impedance is less, and this is generally the case: one is given a certain amount of  $C$  that has to be tuned with a line.

In the case where  $l_L$  is further varied by changing the characteristic impedance  $Z_0$  of the shorted line, it appears the impedance seen at the capacitor terminals is greater when  $Z_0$  is chosen larger even though  $l_L$  is thereby increased, although the variation is not very marked.

\*"Resonant Impedance of Transmission Lines," *Proc. I.R.E.*, Sept. 1939.



The impedance (really resistance) measured at the capacitor terminals

$$Z_1 = r$$

$$\approx Z_o \frac{1}{k} \cdot \frac{1 - \cos 2\theta_L}{2\theta_L + \sin 2\theta_L}$$

or

$$\frac{Z_1}{Z_o} = \frac{r}{Z_o}$$

$$\approx \frac{1}{k} \cdot \frac{1 - \cos 2\theta_L}{2\theta_L + \sin 2\theta_L} \quad (27)$$

where  $\theta_L$  is the length of the shorted line measured in radians ( $= 2\pi l_L/\lambda$ ), and  $k$  is the dissipation factor and equals approximately  $(R/2\omega L)$  where  $R$  and  $L$  are the series resistance and inductance of the shorted line per unit length. The unit of length is immaterial since their ratio is involved.

To facilitate computation of  $r$ , the quantity

$$\frac{1 - \cos 2\theta_L}{2\theta_L + \sin 2\theta_L}$$

of Eq. (27) has been plotted in Fig. 21. It is labeled there  $F$  and

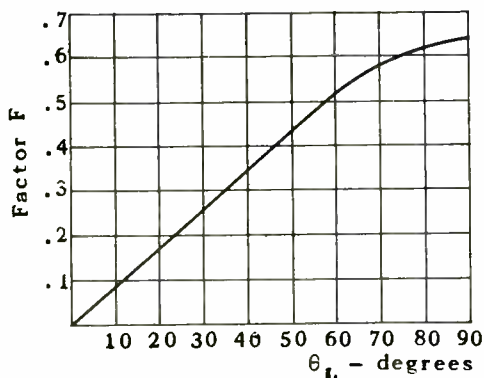


Fig. 21.—Plot of  $F$  vs.  $\theta_L$ .

is plotted against  $\theta_L$  in degrees.

Its use will now be illustrated by means of the previous problem. It was found that for a 10- $\mu$ f condenser at 300 mc, the shorted concentric line should have an electrical length of 34.5° for  $Z_o = 76.8$  ohms. From Fig. 21, the value of  $F$  is found to be .3. To evaluate  $k$ ,  $R$  and  $L$  must first be calculated. Let  $a = 1/8$  inch, and  $b = 3.6 \times 1/8 = .45$  inch. Then, from Eq. (16a),

$$R = 5 \times 10^{-7} \sqrt{3 \times 10^8} \left[ \frac{1}{.125} + \frac{1}{.45} \right]$$

$$= .0886 \text{ ohm per foot}$$

The inductance of a concentric line is given approximately by

$$L = 0.140 \times 10^{-6} \log \frac{b}{a} \text{ h/foot} \quad (28)$$

Hence,

$$L = 0.140 \times 10^{-6} \log 3.6$$

$$= .0779 \times 10^{-6} \text{ henry per foot}$$

Then

$$k = \frac{R}{2\omega L}$$

$$= \frac{.0886}{2 \times 2\pi \times 3 \times 10^8 \times 7.79 \times 10^{-8}}$$

$$= 3.02 \times 10^{-4}$$

The resistance measured across the capacitor is

$$r = \frac{Z_o F}{k} \quad (29)$$

or

$$r = \frac{76.8 \times .3}{3.02 \times 10^{-4}} = 76.3 \times 10^3$$

$$= 76,300 \text{ ohms}$$

This is a high value for the given  $C$  and frequency, and illustrates the high  $Q$  that such a combination can have. It does not take in account the losses in the capacitor, however. These will be in parallel with the above resistance.

*Line Taps.*—Suppose that instead of measuring the impedance at the capacitor terminals, measurements are made at a point nearer the shorted end of the line.

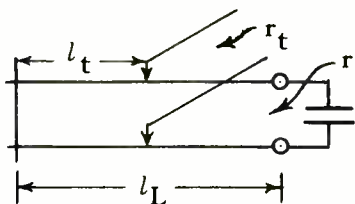


Fig. 22.—Use of taps on a shorted equivalent quarter-wave line to obtain a lower impedance.

This is shown in Fig. 22, where  $l_t$  is the length of line at which the taps are made. Since the voltage varies sinusoidally along the line, the impedance seen at any point of the line varies as the square of the sine of the electrical length or angle of the line. For a tuned line the impedance looking into any point of the line is a pure resistance—call it  $r_t$ . Then

$$\begin{aligned} r_t &= r \frac{\sin^2(360 l_t / \lambda)}{\sin^2(360 l_L / \lambda)} \\ &= r \frac{\sin^2 \theta_t}{\sin^2 \theta_L} \end{aligned} \quad (30)$$

This would indicate that a lower resistance  $r_t$ , connected at point  $\theta_t$ , is exactly equivalent to

a higher resistance  $r$  connected at  $\theta_L$ . This is only approximately true. A resistance  $r_t$  at  $\theta_t$  tends to disturb the sinusoidal distribution of the voltage along the line by producing a kink at that point, unless it is very high compared to the characteristic impedance of the line and the damping in the line. At the center of the line an order of magnitude of one megohm has been indicated for  $r_t$ ,\* in order that the voltage distribution be not unduly disturbed.

Nevertheless, Eq. (30) can be employed with sufficient accuracy for practical purposes, particularly when the damping of the line is low and the  $Q$  is consequently high. It can serve as a first approximation even in circuits of lower  $Q$ , and if sufficient adjustment latitude is provided exact tap settings may be made subsequently by experiment.

At any rate, the impedance seen looking into the shorted line at a point nearer the shorted end is lower than that seen at a point nearer the open end. Thus, one can couple a tube to the circuit at a point where a maximum output from the tube is obtained, i.e., optimum impedance matching is possible.

In order to facilitate the computation of the tap length  $\theta_t = (360 l_t / \lambda)$ , Eq. (30) has been transformed and plotted in Fig. 23. In this figure, the impedance ratio  $r_t / r$ . Since  $r_t$  can equal  $r$  only as a maximum value when  $l_t = l_L$ ,  $a$  is a fraction whose maximum value is unity. For each line

\*See R. King, "General Amplitude Relations for Transmission Lines with Unrestricted Line Parameters, Terminal Impedances, and Driving Points," *Proc. I.R.E.*, Dec. 1941.

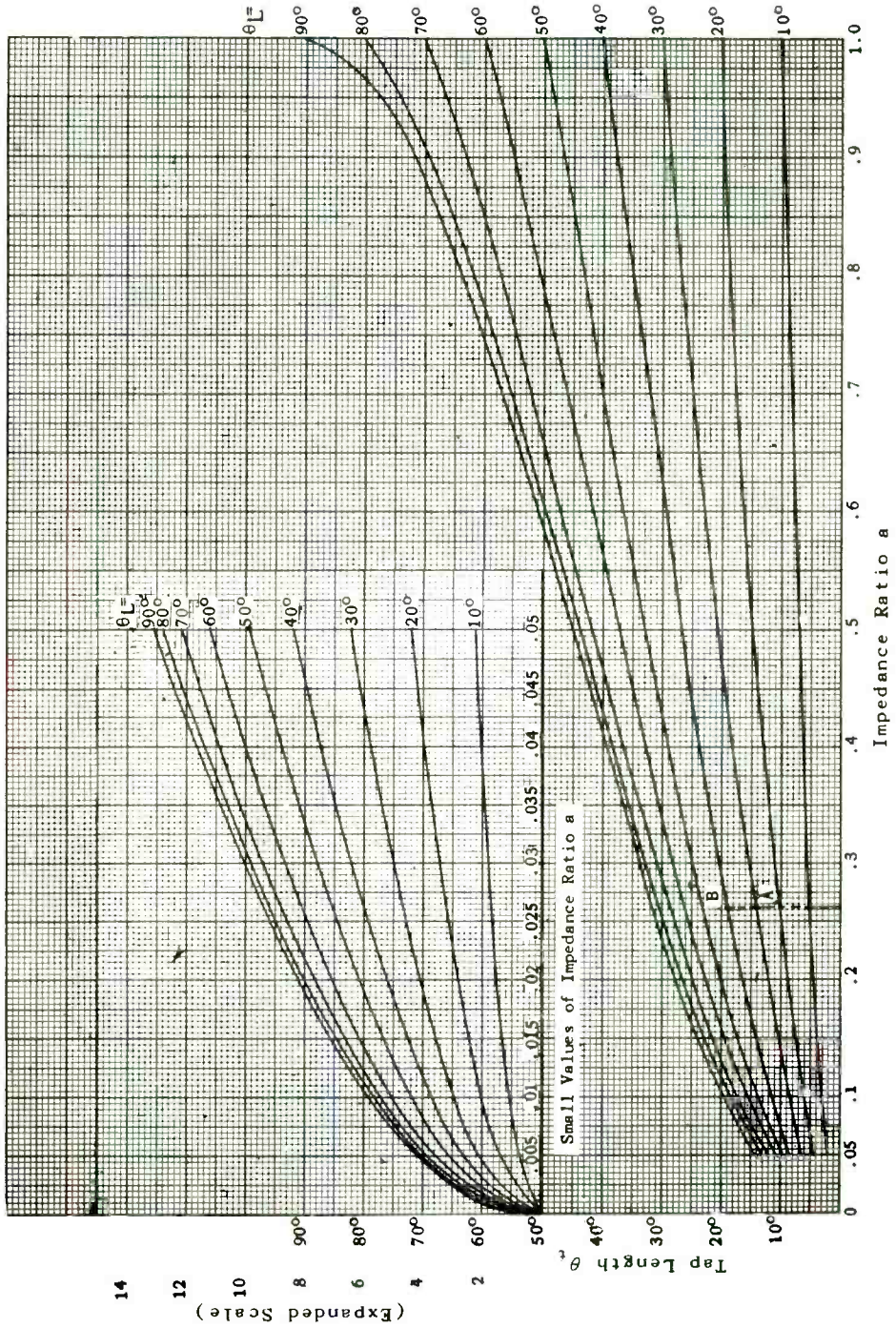


Fig. 23.—Family of curves giving relation between tap length  $\theta_t$  of an equivalent  $\lambda/4$  shorted line and impedance ratio  $a$ .

length in degrees  $\theta_L$ , a curve has been plotted giving the ratio of

$$\frac{\sin^2 \theta_t}{\sin^2 \theta_L} = \frac{r_t}{r} = a$$

Thus, a family of curves for values of  $\theta_L$  differing by ten degrees has been plotted. Interpolation between plotted values can then be made where necessary.

Suppose, in the previous example where  $f = 300$  mc, it is desired to couple in the tube so that it sees an impedance of 20,000 ohms. The maximum impedance is 76,300, hence the impedance ratio  $a$  is  $20,000/76,300 = .262$ . The line length  $\theta_L$  is  $34.5^\circ$ . An ordinate through .262 (dotted line in Fig. 23) intersects the  $\theta_L = 30^\circ$  curve in A, and the  $\theta_L = 40^\circ$  curve in B. The tap length  $\theta_t$  is  $14.7^\circ$  and  $18.9^\circ$ , respectively.

For  $\theta_L = 34.5$ ,  $\theta_t$ , by interpolating, is

$$14.7 + \left[ \frac{34.5 - 30}{40 - 30} \times (18.9 - 14.7) \right] = 14.7 + 1.89 = 16.59^\circ$$

If Eq. (30) is solved directly,  $\theta$

comes out to be  $16.85^\circ$  or practically the same value as the curves.

The actual length of line up to the tap or  $l_t$ , is then very simply

$$l_t = \frac{\lambda \theta_t}{360} \tag{31}$$

or

$$l_t = \frac{1m \times 16.85}{360} \times 3.28$$

$$= .1534 \text{ feet or } 1.841 \text{ inches}$$

*Line Oscillator.*—In Fig. 24 is shown another application of a concentric line to an oscillator. Here the operating frequency is low enough for lumped circuit elements to be feasible in the plate circuit, but the superior Q of the quarter-wave line makes it preferred in the grid circuit as a frequency-stabilizing element.

Of particular interest in Fig. 24 is the fact that the grid is tapped down on the line. As will be shown later, at the ultra-high frequencies vacuum tubes begin to exhibit excessive losses. Of particular importance are those developed in the grid circuit owing to transit time and cathode induc-

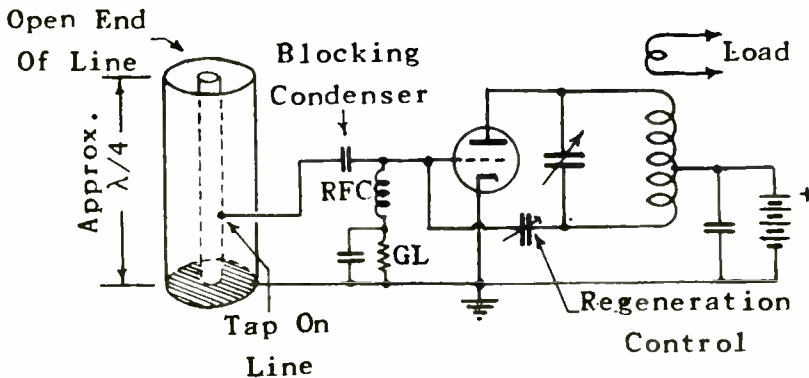


Fig. 24.—Use of a concentric line as a high-Q frequency stabilizing element in an oscillator.

tance effects. These losses occur even though the grid may be negatively biased and not permitted to draw *conductive* current.

Accordingly, the impedance looking into the grid circuit may be regarded as a resistance and capacity in parallel. If the grid were connected to the open end of the concentric line, then two things would happen. First, the grid capacity would require the line length to be shortened. Second, the resistance component would lower the impedance and hence the  $Q$  of the line.

By tapping down on the line, the resulting impedance transformation makes the equivalent capacity at the open end of the line very low. Therefore, little effect on the line length is incurred; one can assume to a fair degree of approximation that the line is one-quarter wave in length. Such an assumption simplifies the determination of the tap position for a required impedance. On the other hand, if it is desired to employ a trimmer capacitor for adjustment purposes at the open end, then the line must be shortened accordingly, and the method previously outlined must be employed.

The impedance seen at the open end of the line owing to the line's resistance can be found by using Eq. (29) where  $F = 2/\pi$ . In this particular case (for a quarter-wave line) Eq. (29) becomes

$$r = \frac{2Z_o^2}{Rl} = \frac{8Z_o^2}{R\lambda} \quad (32)$$

where  $l$  is  $\lambda/4$ .

Then if the impedance desired to be seen at the tap is  $r_t$ , the tap position can be found by using Fig. 23. Or, alternatively, the

effect of the grid resistance in damping the resonant line can be the basis for the choice of the tap position.

To illustrate the latter choice suppose a concentric line is used for which  $b = 7.56''$  (or  $15.12''$  inner diameter of outer conductor), and  $a = 2.1''$  so that  $b/a = 3.6$ . Suppose the oscillating frequency is to be 100 mc for which  $\lambda = 3 \text{ m} = 9.84$  feet. The resistance per loop foot is calculated from Eq. (16a) to be

$$R = 5 \times 10^{-7} \sqrt{100 \times 10^6} \left( \frac{1}{2.1} + \frac{1}{7.56} \right) \\ = .00304 \text{ ohm}$$

The inductance depends solely upon  $b/a$ , and for  $b/a = 3.6$ , it has been found to be  $.0779 \times 10^{-6}$  henries/ft.

$$Q = \frac{2\pi \times 76.8}{.00304 \times 9.84} = 16,100$$

Furthermore, the line losses look like a resistance across the *open end* of the line of value, from Eq. (32)

$$r = \frac{8(76.8)^2}{.00304 \times 9.84} = 1,578,000 \text{ ohms}$$

Now suppose the grid circuit has an input resistance of 10,000 ohms. If the grid were connected directly to the open end of the line, its 10,000 ohms would shunt the above 1,578,000 ohms and lower the  $Q$  in the same proportion as it lowers the open-end resistance. If the grid is tapped down on the line, its 10,000 ohms resistance will be reflected (transformed) to the open end of the line as a much higher impedance, and the decrease in  $Q$  will be correspondingly less.

Suppose that adequate frequency

stability is obtained even if the  $Q$  is lowered from 16,100 to 10,000. The equivalent resistance will be lowered from 1,578,000 to

$$r = 1,578,000 \times \frac{10000}{16100}$$

$$= 980,000 \text{ ohms}$$

This means that the grid resistance must be of a value  $r'_g$  such that in paralleling the 1,578,000 ohms of the line, it reduces this value to 980,000 ohms. The value of  $r'_g$  must therefore be

$$r'_g = \frac{r \times r}{r - r} = \frac{1578000 \times 980000}{1578000 - 980000}$$

$$= 2,600,000 \text{ ohms}$$

Thus, 10,000 ohms must be stepped up to 2,600,000 ohms; an impedance ratio of  $2,600,000 \div 10,000 = 260$ . To use Fig. 23 the reciprocal is required, or  $1 \div 260 = .00385$ . The total length of line is  $\theta_L = 90^\circ$ . Using this curve of Fig. 23, there is obtained for a = .00385 a value of  $\theta_t = 3.7^\circ$ . This corresponds to

$$\frac{3.7}{360} \times 9.84 = .101 \text{ feet}$$

$$= 1.21 \text{ inches}$$

However, the equivalent resistance of 1,578,000 ohms at the open end of the line, which represents the line losses, appears at the grid tap as  $1,578,000 \div 260 = 6,100$  ohms. The farther down the tap is set, the lower does this resistance appear. Such a low resistance may require a rather large feedback condenser (labeled "Regenerative Control" in Fig. 24), in fact, may require an excessive

amount of the tube's output.

What is desired to present in this assignment is a means of evaluating the effect of the tap setting on the tube's action. The tube is usually set up and settings experimentally determined. If the tap chosen that will permit satisfactory oscillation is too near the open-circuit end, and calculation shows that the  $Q$  of the line is thereby lowered too much, then the engineer knows how to proceed to make changes. Too high a tap setting indicates that the line losses are too high. This can be remedied by silver-plating the conductor surfaces, and particularly by increasing the conductor size, i.e.,  $b$  and  $a$ , while  $b/a$  remains 3.6 in value.

The effect of each change can be calculated as described above, and it can also be determined whether one can meet a certain specification or not with the circuit components employed.

*Antenna Coupling.*—Another typical problem is that shown in

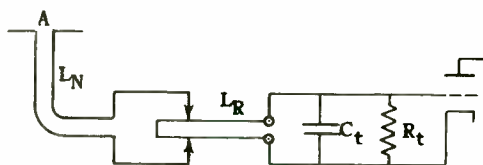


Fig. 25.—Use of a shorted, tapped matching stub between an antenna line and a vacuum tube.

Fig. 25. This represents an antenna A that is connected to a non-resonant line  $L_N$ , which in turn is connected to taps on a short-circuited stub  $L_R$ , whose open end is connected to the grid and cathode of a vacuum tube amplifier. The input impedance of the tube is

represented by the capacity  $C_t$  and resistance  $R_t$  in parallel.

Owing to the resonant properties of the line  $L_R$ , a voltage  $E_1$  impressed at the taps is stepped up to a much higher value at the grid of the tube. At the same time the losses in  $L_R$ , together with  $R_t$ , can be made to present an impedance at the taps to  $L_N$  that is equal to its characteristic impedance. The latter therefore is non-resonant, as stated above, and merely conveys the signal picked up by the antenna over a distance of as many wavelengths as is necessary to the grid of the tube.

The resonant line  $L_R$  performs the same service at ultra-high frequencies that the conventional lumped circuit, shown in Fig. 26,

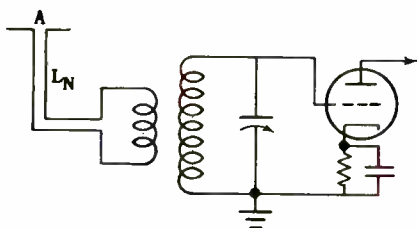


Fig. 26.—Equivalent lumped tuned circuit used to match an antenna line to a vacuum tube.

performs at lower frequencies. The performance in either case is determined by considerations somewhat different from those pertaining to oscillator operation.

In the case of the receiving antenna circuit, the  $Q$  desired is determined by the width of the side bands, and is usually on the order of magnitude of 100, instead of 10,000 or thereabouts for the oscillator tank circuit. For the lower

value of  $Q$  required the line losses are normally negligible, and the  $Q$  is determined primarily by the input resistance of the associated tube. The damping effect of this resistance upon the line may be varied by tapping the grid circuit down on the line, and thus any desired value of  $Q$  may be obtained.

At the same time, it is not sufficiently accurate to assume that the voltage distribution remains sinusoidal and is unaffected by the grid tap position. Hence, a different method of attack is necessary.

*Selectivity of Circuit.*—The selectivity of the circuit is determined by measuring the voltage

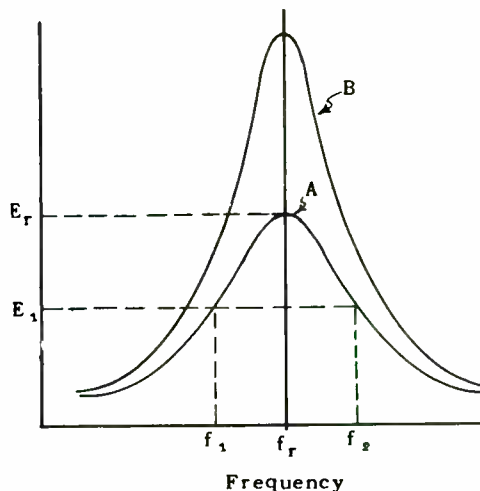


Fig. 27.—Examples of resonance curves for a low- $Q$  and for a high- $Q$  circuit.

at some point of the line, such as the grid tap, as the frequency is varied. A curve, such as A in Fig. 27, will be obtained. Maximum voltage  $E_r$  is obtained at the frequency  $f_r$  for which the shorted line is

resonant, i.e., is one-quarter wave in length. At two other frequencies  $f_1$  and  $f_2$ , spaced approximately by equal amounts from  $f_r$ , the voltage will have dropped to some lower value  $E_1$ . Suppose  $E_1$  is  $.707 E_r$ . Then, as described previously,

$$\frac{f_r - f_1}{f_r} = \begin{array}{l} \text{per cent frequency} \\ \text{change off resonance} \end{array} \\ = \frac{1}{2Q} \quad (13a)$$

If  $Q$  is high, the per cent frequency change is small and vice versa if  $Q$  is low. Thus the  $Q$  of the circuit may be used as a measure of the selectivity of the circuit: it can indicate the sharpness of the resonance curve and thus the band width. The band width of frequencies transmitted can be arbitrarily defined as

$$2(f_r - f_1) = (f_2 - f_1)$$

This does not mean that voltages of frequency lower than  $f_1$  or higher than  $f_2$  are not transmitted, but that they are markedly attenuated, and hence may be presumed to have little effect upon the performance of the circuit.

Note that if the voltage is attenuated to 70.7 per cent, that is, to  $1/\sqrt{2}$  as compared to  $E_r$ , then the power developed across a resistance by this voltage will vary as the square of the voltage. Thus the power developed by  $E_1$  in Fig. 27 is  $(1/\sqrt{2})^2 = 1/2$  of the power developed by  $E_r$  across the same resistance. Expressed in db this is

$$\text{db relative attenuation} = 10 \log (1/2)$$

$$= -10 \log 2 = -3 \text{ db}$$

where the minus sign indicates attenuation

If the tube is tapped down on the line nearer the shorted end, the damping is less and the  $Q$  is higher. In such a case a resonance curve such as B, Fig. 27, may be obtained. This clearly has a smaller band width.

The importance of the band width of the antenna circuit may be very great at u.h.f. At these frequencies tubes do not amplify very well, particularly in the upper end of this spectrum. Hence, at frequencies above a so-called "cross-over point," the antenna signal is fed directly to a converter tube or crystal first detector, and mixed with a local oscillator signal to produce at once a lower, i.f. signal, which may then be selectively amplified. In short, u.h.f. receivers are often of the super-heterodyne type, without benefit of an r.f. stage.

The absence of the r.f. stage tends to decrease the r.f. selectivity, and hence the attenuation of the image signal. For that reason a selective antenna circuit is important: it is the only means by which image rejection can be obtained.

*Image Rejection.*—It will be of value to review briefly the question of image rejection. Let  $f_s$  be the signal it is desired to pick up, and  $f_1$  the intermediate frequency to which it will be converted and then amplified by the selective i.f. amplifier. The conversion is accomplished by mixing the incoming signal with that of a local oscillator in a converter tube, and then extracting the difference beat frequency between them to amplify in the i.f. amplifier.



Thus, let the local oscillator frequency be  $f_o$ . Then  $f_i = f_s - f_o$  or  $f_o - f_s$ , depending upon which is the higher frequency. Suppose  $f_s$  is higher than  $f_o$ . It is evident that another signal frequency  $f_k$  that is below  $f_o$  by an amount  $f_i$  will also produce in conjunction with  $f_o$  a beat frequency  $f_i$  in the converter tube, and thus be amplified by the i.f. amplifier too, provided  $f_k$  can get through the antenna tuned circuit. This frequency  $f_k$  is known as an image frequency. (Other frequencies that beat with harmonics of the local oscillator can also produce  $f_i$ , but such frequencies are generally too far away from  $f_s$  to be able to pass through the antenna circuit.)

On the other hand, if  $f_k$  is close to  $f_s$  it can pass through the antenna circuit, but will produce in the converter tube's output a beat frequency ( $f_o - f_k$ ) that is so much lower than  $f_i$  that the i.f. amplifier will reject it. Hence, the antenna circuit must be able to block frequencies  $f_k$  that are  $f_i$  cycles below  $f_o$ , where  $f_o$  is in itself  $f_i$  cycles below the signal frequency  $f_s$ . In other words, unwanted signals  $f_k$  that are  $2f_i$  below  $f_s$  must be rejected by the antenna circuit.

The ratio of image to signal response can be expressed in terms of the circuit  $Q$  and the band width as previously defined. The latter was stated to be the total number of cycles below and above resonance at which the response falls off to 70.7 per cent of the response at resonance. Let the number of cycles to either side of resonance  $f_r$  be denoted by the symbol  $f_b$ . Thus,  $f_b$  corresponds to  $(f_r - f_i)$  in Eq. (13a) and is half of the total band

width. Multiplying both sides of Eq. (13a) by  $f_r$ , there is obtained

$$f_b = \frac{f_r}{2Q} \quad (13b)$$

Now let  $f_i$  be the i.f. frequency, and suppose the antenna system is tuned to the desired signal frequency, i.e.,  $f_r = f_s$ . If the unwanted image frequency, call it  $f_k$ , is  $2f_i$  cycles away from  $f_s$ , then the output of the converter tube due to  $f_k$  will be of the same frequency as that due to  $f_s$ , namely,  $f_i$ ; in other words, this relationship defines the image frequency. Then the ratio of the response at image frequency to that at signal frequency will be

$$\frac{\text{image response}}{\text{signal response}} \sim \frac{f_b}{2f_i} \quad (33)*$$

This ratio can be reduced by reducing  $f_b$  or by increasing  $f_i$ . Physically this means that if the  $Q$  of the antenna circuit is high, then the half band width  $f_b$  is small and if, furthermore, a high intermediate frequency  $f_i$  is chosen, then the image frequency  $f_k$  will be far down on the narrow resonance curve, so that image rejection will be high.

This is clearly shown in Fig. 28. Curve A is a high  $Q$  resonant response; curve B, a low  $Q$  response. For A the half band width is  $f_{b1}$ , i.e., at this number of cycles off resonance, the response is 70.7 per cent of its value at the peak of the curve. For B the half band width is  $f_{b2}$ , which is farther away from the peak because Curve B is

\*See, for example, Herold and Malter, "Radio Reception at Ultra-High Frequency"—Part I, *Proc. I.R.E.*, Aug. 1943.

flatter than A. The unwanted image frequency  $f_k$  is shown as  $2 f_1$  cycles off resonance (which has been set to correspond with the desired frequency  $f_s$ ). As is clear from the

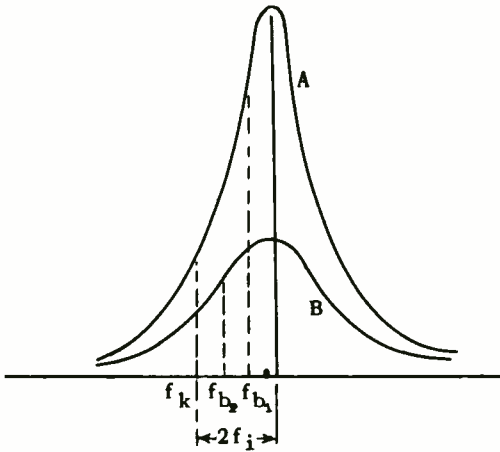


Fig. 28.—Relation between half band width and image frequency for two values of circuit Q.

figure, the difference in response between that for  $f_{b1}$  and  $f_k$  for curve A is much greater than that between the response at  $f_k$  and  $f_{b2}$ , i.e., curve A has the greater image rejection.

At the same time, note that if  $f_1$  is increased  $f_k$  moves to the left, and the image rejection is greater along either curve. It is also clear from the figure that owing to the symmetry of the resonance curves, the same reasoning applies if  $f_k$  is  $2 f_1$  cycles to the right of the resonant frequency, i.e., the image rejection is practically the same whether the local oscillator is adjusted to operate  $f_1$  cycles above or below  $f_s$ . Eq. (33) holds under most practical conditions, such as for values of  $f_b$  and  $f_1$  that are both small compared to

the signal frequency. In practice  $f_1$  is generally made  $1/5$  of  $f_s$  or less, which meets the above requirement.

*Calculation of Q of Loaded Line.*—The above can now be applied to the antenna problem discussed previously. First the Q of the resonant line must be calculated. As mentioned previously, it is assumed that the losses of the line are negligible compared to that of the tube's input, so that the latter determines the Q. When the tube is connected to the open end of the line, the input capacitance  $C_t$  shortens the line from its normal length of  $\lambda/4$ , for resonance to be maintained.

The procedure to be employed in calculating the Q is as follows: As has been mentioned in previous assignments, a circuit having distributed constants may be replaced by a suitable circuit having lumped constants, at any one frequency or band of frequencies. If the frequency band is small, and around the resonant frequency of the line

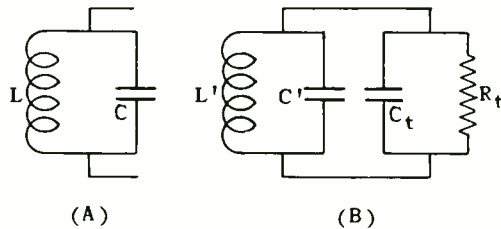


Fig. 29.—Representation of a quarter-wave line over a narrow band of frequencies by an equivalent lumped circuit.

(distributed circuit) then a simple combination of lumped inductance and capacity can be used to repre-

sent the line quite satisfactorily. For a quarter-wave line shorted at the far end, the lumped arrangement is that shown in Fig. 29(A). (This assumes the line losses are negligible.)

If a parallel combination of resistance and capacity is connected to the end of the line, the line must be shortened. A line shorted at the far end and less than  $\lambda/4$  in length, has an *inductive reactance*. The proper length of it will have sufficient inductive reactance to tune with the attached capacity to the given frequency, and the connected resistance will damp the circuit and give it a certain  $Q$ .

In Fig. 29(B) is shown the reduced line equivalent, together with  $C_t$  and  $R_t$  representing the input impedance of the tube. The line equivalent has an inductance  $L'$  and a capacity  $C'$  that is less than  $L$  and  $C$  for the  $\lambda/4$  line equivalent shown in Fig. 29(A). The important thing to note is that in the case of the reduced line, its equivalent lumped circuit, although having an inductive reactance, cannot be just an inductance but must contain *both inductance  $L'$  and capacity  $C'$  in order to simulate the reduced line over a band of frequencies*. The values of  $L'$  and  $C'$  are such that at any frequency under consideration the combination has a *net inductive reactance*, but it would lead to an incorrect calculation of the  $Q$  of the circuit to attempt to represent the reduced line by an inductance alone.

The reason is that the  $Q$  of the combination may be expressed in terms of the angular frequency  $\omega (= 2\pi f)$ , the resistance  $R_t$  and the total capacitance, namely,  $C' + C_t$ :

Thus

$$Q = \omega(C' + C_t)R_t = \omega CR_t \quad (34)$$

where  $C$  is the total capacitance and equals  $(C' + C_t)$ .

It remains to determine the capacitance  $C'$  residing in the reduced section of line. It might be thought that if the capacity per unit length of the line is  $C_o$ , and the line length is  $l$ , that  $C'$  would simply be  $C_o l$ . This, however, is not the case, as can be seen from an examination of Fig. 30. The line can be regarded as

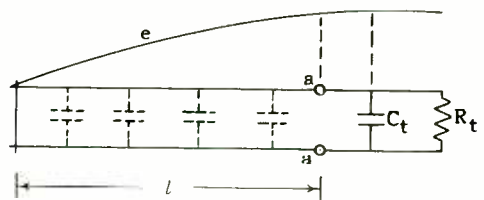


Fig. 30.—The voltage varies along a resonant line, so that each element of capacitance has voltage across it.

having an infinite number of infinitesimal capacitors shunting it along its length (suggested by the dotted line capacitors). The voltage distribution is a section of a sine wave.

It will be observed that the voltage across those capacitors near the shorted end of the line is lower than that across those near the open end of the line. Hence, the latter capacitors draw more charging current than the former, and are therefore more effective in determining the average or net capacity of the line.

The combined effects of all the infinitesimal condensers can be prorated as equivalent to a single lumped condenser  $C'$  connected to the terminals  $a$ - $a$ , where

the measurement is to be made. The method of determining this is based on the integral calculus. The result is most compactly given for the total capacity  $C$ , which includes  $C_t$ . It is

$$C = \frac{1}{2} \left( C_t + \frac{C_o l}{\sin^2 \theta} \right) \quad (35) *$$

where  $\theta$  is the line length expressed in electrical degrees instead of as  $l$ . Thus,  $\theta = 360 l/\lambda$  degrees. The distributed capacity per unit length  $C_o$  and the characteristic impedance of the line both depend upon the line dimensions. Hence,  $C_o$  can be expressed in terms of  $Z_o$ . Thus, if  $C_o$  is in  $\mu\mu f$  per centimeter

$$C_o = \frac{33.3}{Z_o} \quad (36) **$$

for  $Z_o = 76.8$  ohms,  $C_o = .433 \mu\mu f/cm$ .

Then, from Eq. (34), the  $Q$  of the combination is

$$Q = \frac{\omega R_t}{2} \left( C_t + \frac{C_o l}{\sin^2 \theta} \right) \quad (37)$$

It will be instructive to apply the above to an actual problem. Suppose the operating frequency is 150 mc,  $C_t = 5 \mu\mu f$ , and  $R_t = 7,500$  ohms. (Note how low the input resistance  $R_t$  of a tube can become at u.h.f.) The reduced line length can be found from Fig. 19. Assume  $Z_o = 76.8$  ohms. The capacitive reactance of  $C_t$  is  $X_t = 1/[2\pi \times 150 \times 10^6 \times 5 \times 10^{-12}] = 212$  ohms.

\*These and many of the succeeding formulas are given in the article by Herold and Malter previously mentioned.

\*\*Refers to the same source as Eq. (35).

Then  $X_t/Z_o = 212/76.8 = 2.76$ . From Fig. 19, the line length  $\theta_L$  comes out to be  $70^\circ$ , and the corresponding length is  $70\lambda/360 = 70 \times 3 \times 10^{10} \div (150 \times 10^6 \times 360) = 38.9$  cm. (Note that  $\lambda = c/f = 3 \times 10^{10}/150 \times 10^6$ .)

Then, by Eqs. (36) and (37), the  $Q$  is

$$\begin{aligned} & \frac{2\pi \times 150 \times 10^6 \times 7500}{2} \\ & \times \left( 5 + \frac{.433 \times 38.9}{\sin^2 70^\circ} \right) \times 10^{-12} \\ & = 15 \times 75 \times \pi \left( 5 + \frac{16.85}{(.9397)^2} \right) \times 10^{-3} \\ & = 85.3 \end{aligned}$$

*Location of Antenna Tap.*—The 75-ohm antenna non-resonant line is connected to the resonant line at another tap, located so that the impedance seen looking into the resonant line at that point is 75 ohms in order to match the antenna line. The position of this tap requires extensive calculations to locate it accurately. Fortunately, in practical work it need be located only approximately and then sufficient latitude in adjustment provided to permit an exact match to be determined experimentally. An exact match is indicated by an absence of standing waves (voltage or current) on the non-resonant antenna line.

The antenna tap can be estimated by the same rule as that employed for the very high  $Q$  oscillator tank circuit, namely, by the sine-squared rule. Thus, if  $\theta_A$  is the length of the resonant line up to the antenna tap, and  $\theta_t$  the

length up to the tube connection, and  $R_A$  is the resistance required to terminate the antenna line, then

$$\begin{aligned}\sin^2 \theta_A &= \frac{R_A}{R_t} \sin^2 \theta_t \\ &= a \sin^2 \theta_t \quad (38)\end{aligned}$$

where  $a$  is the impedance ratio  $R_A/R_t$ . In the problem at hand  $R_t = 7,500$  ohms,  $R_A = 75$  ohms, so that  $a = 75/7,500 = .01$ . Now use Fig. 23, noting that  $\theta_L$  there corresponds to the value  $\theta_t$  which is of interest in this problem. For  $\theta_t (= \theta_L) = 70^\circ$ ,  $\theta_A$  is found to be about  $5.4^\circ$ . This corresponds to a length

$$\begin{aligned}l_A &= \frac{5.4}{360} \times 2\pi \times 3.28 \\ &= .095 \text{ feet or } 1.14\end{aligned}$$

while the total length of the line is

$$\begin{aligned}l_t &= \frac{70}{360} \times 2 \times 3.28 \\ &= 1.275 \text{ feet or } 15.3 \text{ inches}\end{aligned}$$

When the antenna is connected to the resonant line at the appropriate point for matched conditions, it acts to load the line down by an amount equal to that of the tube at its tap. As a result, the  $Q$  of the coupling circuit is reduced to one-half; in this case, to  $85.3 \div 2 = 42.65$ . Such a final value of  $Q$  may be too low for the required image rejection desired, and more than low enough for the band width required. Consequently, a higher  $Q$  may be desired. This, as mentioned previously, can be obtained by tapping the tube down on the resonant line. The procedure to

be followed is best described by continuing the discussion of the numerical problem given above.

*Determination of Image Response.*—The voltage ratio of the response at image frequency to that at signal frequency was given by Eq. (33) as

$$\frac{\text{image response}}{\text{signal response}} \sim \frac{f_b}{2f_1} \quad (33)$$

The power ratio is as the square, namely,  $(f_b/2f_1)^2$ . The db ratio is 10 times the logarithm of this ratio, or  $20 \log (f_b/2f_1) = -20 \log (2f_1/f_b)$ . Thus

$$\begin{aligned}\text{db image attenuation} \\ &= -20 \log (2f_1/f_b) \quad (39)\end{aligned}$$

The minus sign merely signifies that the db represents attenuation. This form gives for  $2f_1/f_b$  a number greater than one, for which the logarithm is more readily found than for a fraction.

Suppose that in the problem the intermediate frequency is 25 mc =  $f_1$ . The half band width  $f_b$  can be found from Eq. (13b). It is

$$f_b = \frac{f_r}{2Q} = \frac{150 \times 10^6}{2 \times 42.6} = 1.76 \text{ mc}$$

$$\begin{aligned}-20 \log (2 \times 25 \times 10^6 \div 1.76 \times 10^6) \\ &= -20 \log 28.4 \\ &= -20(1.4533) \\ &= 29.06 \text{ db}\end{aligned}$$

This is in itself an acceptably large value of attenuation, but at 150 mc a greater value should be possible. Values as high as 60 db and more are obtainable in the ordinary communication receivers that operate in the standard broadcast and short-wave bands, although it is true that these receivers have one or more stages of r.f. amplification involving additional selective circuits.

On the other hand, the complete band width is  $2 \times 1.76$  mc or 3.52 mc. This is more than adequate for a communication receiver. A band width of 20 kc would be adequate, and a band width of two or three hundred kc would take care of f.m. transmission. (Due allowance must also be made for local oscillator drift.)

In such a case the Q can be increased to decrease the band width and to improve the image rejection.

from which

$$f_b = \frac{2 \times 25 \times 10^6}{\text{anlog}(40/20)} = .5 \times 10^6 \text{ c.p.s.}$$

The band width is thus  $2 f_b = 1$  mc, which is more than adequate for communication purposes.

From Eq. (13b), the Q required is

$$Q = \frac{f_r}{2 f_b} = \frac{150 \times 10^6}{2 \times .5 \times 10^6} = 150$$

This value includes the damping effect of the antenna; the Q of the resonant line and connected tube must therefore be double this, or 300. To obtain it, the tube must be tapped down the line.

The circuit is shown in Fig. 31(A) (with the antenna connection omitted). The reduction in overall line length will be less because  $C_t$  is at a point of lower

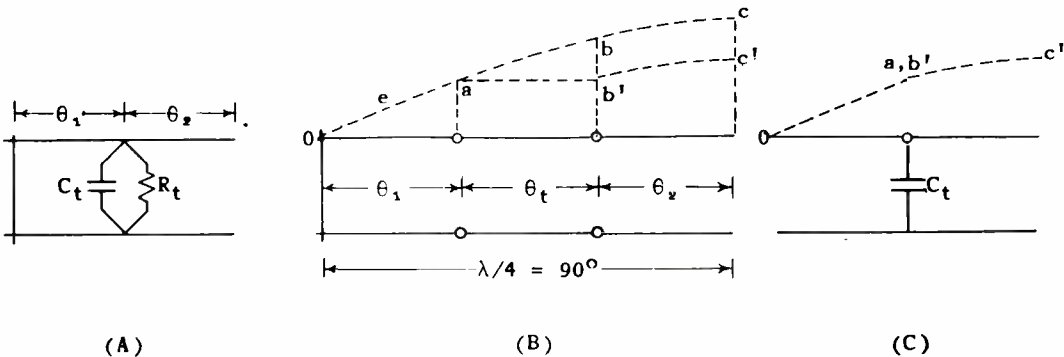


Fig. 31.—Tapping down on quarter-wave line to obtain a higher Q, and method of calculating tap point.

Suppose a 40-db image attenuation is desired. Eq. (39) can be solved for  $f_b$  to give

$$f_b = \frac{2 f_1}{\text{anlog} \left( \frac{\text{db image attenuation}}{20} \right)} \quad (40)$$

voltage and consequently is less effective. The problem is to determine  $\theta_1$  so as to obtain a Q of 300 in the above problem, and also to determine  $\theta_2$  so that  $\theta_1$ ,  $\theta_2$  and  $C_t$  will form a resonant circuit.

The Q value is determined by

Eq. (34), except that now the total capacity is composed of that residing in  $\theta_1$ , that in  $\theta_2$ , plus  $C_t$ . It is thus necessary to determine the lumped capacities equivalent to that in  $\theta_1$  and that in  $\theta_2$ . In order to do this, the voltage distribution along the tapped line must be known. The distribution will not be a single sine curve, but two segments discontinuous at the tap point. The shapes can be evaluated from the following reasoning:

From the short-circuit at the left (where the voltage is zero), the voltage rises along  $\theta_1$  in a sinusoidal manner up to  $C_t$ . The latter can be replaced by an appropriate section of line less than  $\lambda/4$  in length. (It will be recalled that a line less than  $\lambda/4$ , open-circuited at one end, has a net capacitive reactance when measured from the other end.) Call the length of the equivalent line  $\theta_t$ . On the end of this can be added  $\theta_2$ , so that  $\theta_1 + \theta_t + \theta_2 = 90^\circ$ . This is shown in Fig. 31(B). Across such an equivalent line the voltage can be regarded as building up smoothly in one sinusoidal curve from zero at the left to a maximum at the right, as shown by the smooth dotted line.

The voltage along  $\theta_1$  is  $oa$ , and along  $\theta_2$  is  $bc$ . Now if  $\theta_t$  be replaced by the lumped capacitor  $C_t$ , the two sections  $\theta_1$  and  $\theta_2$  are no longer separated, and hence their voltage segments must be pieced together so that their shapes are unchanged, but so that they have a common value at their junction point. This means that  $bc$  must be moved downward until  $b$  is no higher than  $a$ , and thus  $b'c'$  is obtained. The final distribu-

tion with  $C_t$  instead of  $\theta_t$  is therefore as shown in Fig. 31(C). The effect of  $C_t$  has been to produce a break or discontinuity in the voltage wave, and that is why the simpler method given previously is not employed in this problem: the addition of capacity or resistance at some point along a resonant line affects the voltage distribution, unless the impedance of such a shunt is very high, or the connection is sufficiently close to a point of low voltage, such as the shorted end of the line. In this case  $\theta_1$  is very small. This was the situation for the oscillator, but in the antenna problem a more careful analysis is necessary.

With  $C_t$  given, once  $\theta_1$  is chosen,  $\theta_2$  can be found as follows:

The line length  $\theta_2$  can be regarded as an equivalent capacitor  $C_2$  that is in parallel with  $C_t$  to form a total  $C$  that tunes  $\theta_1$  to resonance. The value of  $C$  in terms of  $\theta_1$  can be found from a slight rearrangement of Eq. (25)

$$\begin{aligned}\cot \theta_1 &= \omega C Z_0 = \omega(C_t + C_2)Z_0 \\ &= \omega C_t Z_0 + \omega C_2 Z_0\end{aligned}\quad (41)$$

from which

$$\omega C_2 Z_0 = \cot \theta_1 - \omega C_t Z_0 \quad (41a)$$

But  $\omega C_2 Z_0$  represents the effect of  $C_2$  as a capacitor connected to  $\theta_1 + \theta_t$ , and can be written directly from Eq. (25) as

$$\begin{aligned}\omega C_2 Z_0 &= \cot(\theta_1 + \theta_t) \\ &= \tan [90^\circ - (\theta_1 + \theta_t)] \\ &= \tan \theta_2 \\ &= \cot \theta_1 - \omega C_t Z_0\end{aligned}\quad (42)$$

since, for resonance,  $\theta_1 + \theta + \theta_2 = 90^\circ$ , so that  $\theta_2 = 90^\circ - (\theta_1 + \theta)$ .

Eq. (42) defines  $\theta_2$  in terms of  $\theta_1$ ,  $C_t$ , and  $Z_0$ , which is generally taken as 76.8 ohms for a concentric line in order to obtain a line of inherently maximum Q.

From trigonometry

$$\cos^2 \theta_2 = \frac{1}{1 + \tan^2 \theta_1} \quad (43)$$

If this be solved in conjunction with Eq. (42), one finally obtains

$$\cos^2 \theta_2 = \frac{1}{1 + (\cot \theta_1 - \omega C_t Z_0)^2} \quad (44)$$

The reason for presenting the steps leading to Eq. (44) was to show the student how the effect on the line length of lumped impedances, such as  $C_t$ , can be calculated. A careful rereading of the foregoing steps will indicate the care that must be exercised in analyzing a transmission line problem.

It is first necessary properly to choose  $\theta_1$ . Then  $\theta_2$  is determined by Eq. (44). The capacity equivalent to  $\theta_1$  and that equivalent to  $\theta_2$  must be added to  $C_t$  to give the total capacity C, as it appears at the tap point. Then the Q is given by Eq. (34) where  $C' + C_t$  is here represented by C. The value of C is calculated in the same manner as previously by means of the integral calculus, once the voltage distribution is known [Fig. 31(C)]. It is

$$C = \frac{1}{2} \left( C_t + \frac{C_o l_1}{\sin^2 \theta_1} + \frac{C_o l_2}{\cos^2 \theta_2} \right) \quad (45)$$

where  $C_o$  is the distributed capacity

per unit length, such as the centimeter, and each  $l$  is the length of the line segment which is also measured by the corresponding  $\theta$  in degrees, i.e.,  $l_1$  or  $\theta_1$ , and  $l_2$  or  $\theta_2$ . The dimensions for the  $l$ 's should be in the same units as that for  $C_o$ , such as centimeters.

The value of Q is then, from Eq. (34), given as

$$Q = \frac{\omega R_t}{2} \left[ C_t + \frac{C_o l_1}{\sin^2 \theta_1} + \frac{C_o l_2}{\cos^2 \theta_2} \right] \quad (46)$$

Application of Eqs. (45) and (46) will reveal the following:

1. As the tube is tapped down the line  $\theta_1$  decreases and  $\theta_2$  increases. Thus, Eqs. (35) and (37) are special cases of Eqs. (45) and (46) for which  $\theta_1$  is a maximum and  $\theta_2$  is zero.

2. The actual length of line is  $(\theta_1 + \theta_2)$ . If  $C_t$  is zero, then  $(\theta_1 + \theta_2)$  has a maximum value of  $90^\circ$ , i.e., the line is  $\lambda/4$  in length.

3. If  $\theta_2$  is zero ( $C_t$  connected to the line—now simply  $\theta_1$ —at its open end), then the shortening of the actual line owing to  $C_t$  is a maximum. This is because  $C_t$  is at a maximum voltage point and has maximum effect. Also  $R_t$  has maximum effect, so that the Q is a minimum.

4. If  $\theta_1$  is zero ( $C_t$  connected to the line—now simply  $\theta_2$ —at its shorted end) then the shortening of the actual line owing to  $C_t$  is a minimum, zero, so that  $\theta_2 = 90^\circ$ . This is because  $C_t$  is at a zero voltage point and has therefore zero effect. The same is true for  $R_t$  and hence the Q is a maximum. Eq. (46) indicates the Q to be infinite in such a case, but



this is merely because the line has been assumed to have no losses of itself.

From the above, it is clear that by properly choosing  $\theta_1$  for any given value of  $C_t$  and  $R_t$ , the  $Q$  can be made to have any value desired (up to a maximum determined by the line losses, and a minimum determined by  $R_t$  and  $C_t$  being connected to the open end of the line). If a lower  $Q$  should be desired,  $R_t$  would have to be artificially reduced by connecting a resistor in parallel with the input terminals of the tube. This is seldom the case as usually the opposite is the case: at u.h.f. the input resistance of the tube  $R_t$  is generally too low.

The problem of the antenna circuit design thus resolves itself into the following:

1. A certain band width of image attenuation is desired.
2. This determines the required  $Q$  of the circuit by Eq. (13b) and Eq. (39).
3. To obtain the required  $Q$  the proper tap position must be found. This means  $\theta_1$  must be determined.

Unfortunately, there is no simple equation to give  $\theta_1$  once  $Q$ ,  $R_t$ , and  $C_t$  are known. A series of trials may be made, and for each value of  $\theta_1$  the  $Q$  may be calculated by means of Eq. (46) until the proper value is obtained. This is quite laborious unless the engineer has had considerable experience in such matters or else makes a lucky guess.

However,  $\theta_1$  can be determined graphically by the aid of the curves given in Fig. 32. These represent two families of curves, in which  $\theta_1$  is plotted versus  $\theta_2$  for vari-

ous values of each of two parameters,  $V$  and  $K$ . The particular values of  $V$  and  $K$  in any specific problem are calculated from the data given in the problem. Then, where the curve for the particular value of  $V$  intersects that for the particular value of  $K$ , is a point whose ordinate is the value of  $\theta_1$  required, and whose abscissa is the value of  $\theta_2$  required.

The method is best explained in connection with the antenna problem under discussion. The derivation of these curves is given in the appendix. It will be recalled that the desired value of  $Q$  is 300, the operating frequency is 150 mc,  $C_t = 5 \mu\mu\text{f}$ , and  $R_t = 7,500$  ohms. From these data, the quantities  $V$  and  $K$  can be calculated as follows:

$$V = \frac{1.145 Q Z_o}{R_t} - 3.6 f C_t Z_o \quad (47)$$

$$K = 6.28 f C_t Z_o \quad (48)$$

It is to be noted from the above two equations that a value for the characteristic impedance  $Z_o$  of the transmission line is to be chosen before  $V$  and  $K$  can be calculated. Any desired value for  $Z_o$  can be employed. However, the usual value for  $Z_o$  is 76.8 ohms, corresponding to a line of maximum inherent  $Q$ . If this value for  $Z_o$  be used, Eqs. (47) and (48) become

$$V = \frac{87.9 Q}{R_t} - 276.5 f C_t \quad (49)$$

$$K = 482 f C_t \quad (50)$$

Assume  $Z_o = 76.8$  ohms. Then,

by Eqs. (49) and (50),

$$V = \frac{(87.9)(300)}{7500}$$

$$- (276.5)(150 \times 10^6)(5 \times 10^{-12})$$

$$= 3.31$$

$$K = (482)(150 \times 10^6)(5 \times 10^{-12})$$

$$= .362$$

The nearest V-curves in Fig. 32 are

the ones labelled 3.0 and 3.5; the value 3.31 must be estimated (interpolated) between them. It is approximately 2/3 of the distance between the given curves from the 3.0 curve.

The nearest K-curves are K = .3 and K = .4. Proceed along the estimated V = 3.31 curve until about .6 of the distance between the two K-curves. The result is point A. Going across to the left,  $\theta_1$  is found to be equal to 26.7°.

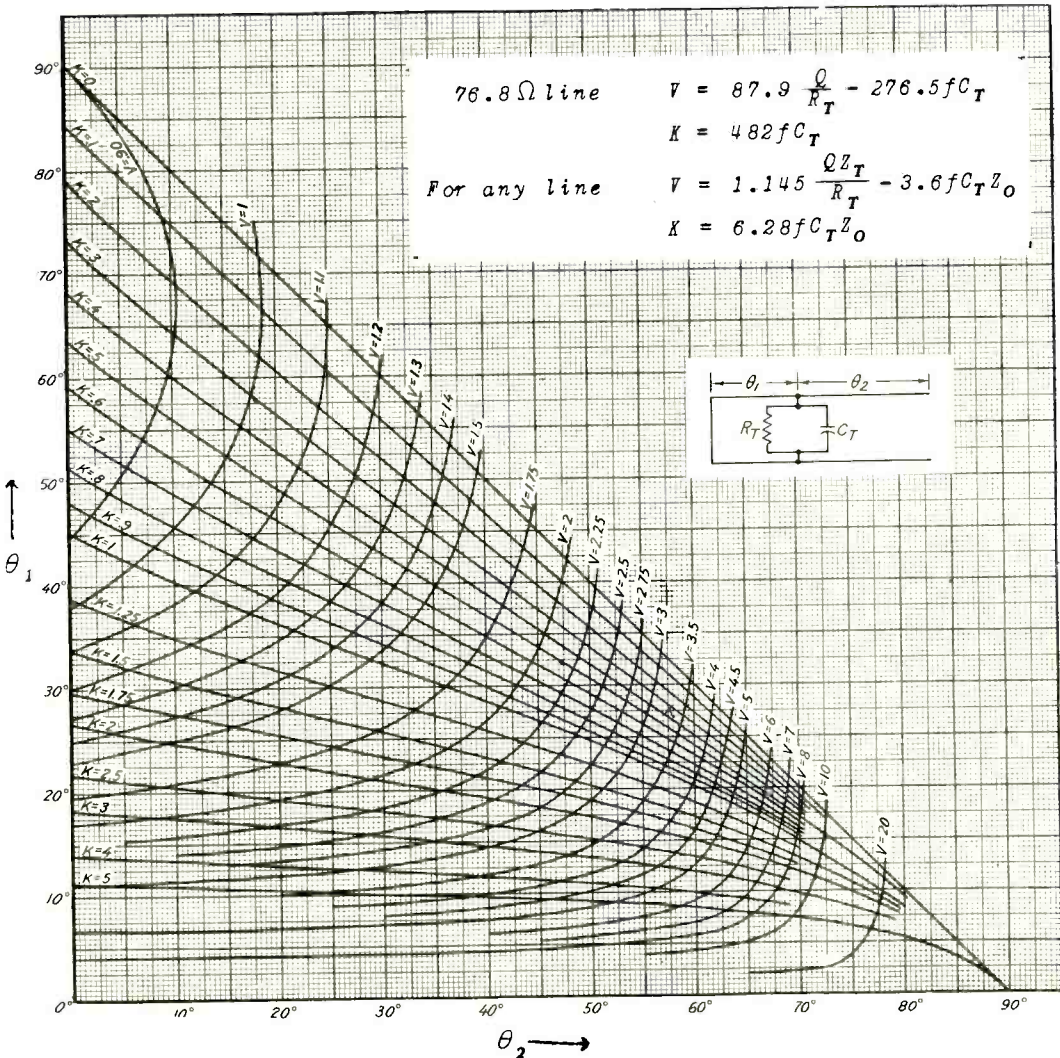


Fig. 32.—Curves giving tap position for a given load, frequency, and desired value of Q.

Going directly down from point A,  $\theta_2$  is found to be  $58^\circ$ .

The total length of the line (in degrees), is then  $26.7^\circ + 58^\circ = 84.7^\circ$ . It is tapped  $26.7^\circ$  from the shorted end. The actual linear distances can now be readily calculated:

$$\begin{aligned} l_1 &= \frac{26.7 \times 200 \text{ cm}}{360} \\ &= 14.83 \text{ cm} \div 2.54 \\ &= 5.85 \text{ inches} \end{aligned}$$

$$\begin{aligned} l_2 &= \frac{58 \times 200}{360} \\ &= 32.2 \text{ cm} \div 2.54 \\ &= 12.68 \text{ inches} \end{aligned}$$

$$\begin{aligned} l_1 + l_2 &= 5.85 + 12.68 \\ &= 18.53 \end{aligned}$$

(Note that 200 cm is the wavelength for  $f = 150 \text{ mc.}$ )

The results can now be checked by computing the Q for the above values and comparing it with the desired value of 300. From Eq. (46)

$$\begin{aligned} Q &= \frac{2\pi \times 150 \times 10^6 \times 7500}{2} \left( 5 + \frac{.433 \times 14.83}{\sin^2 26.7^\circ} + \frac{.433 \times 32.2}{\cos^2 58^\circ} \right) \times 10^{-12} \\ &= \frac{2.25\pi}{2} \left( 5 + \frac{6.42}{(.4493)^2} + \frac{13.96}{(.5299)^2} \right) \\ &= \frac{2.25\pi}{2} (5 + 31.8 + 49.7) = \frac{2.25\pi \times 86.5}{2} = 305 \end{aligned}$$

This is less than 3 per cent higher than desired, and is therefore a very satisfactory value. The values

for  $l_1$  and  $l_2$  may be used in building the line, but some adjustment means should be provided to enable an accurate setting to be made experimentally.

It is to be noted that if a value for  $Z_0$  other than 76.8 ohms had been chosen, Fig. 32 would still apply, but V and K would have to be calculated from Eqs. (47) and (48), using the particular value of  $Z_0$  chosen. The values for  $\theta_1$  and  $\theta_2$  would then be different in order to conform with the selected value of  $Z_0$ .

There remains to evaluate the antenna tap  $\theta_A$ . This can be calculated with sufficient accuracy for all practical purposes by the use of Fig. 23. The impedance ratio  $a$  is  $75/7,500 = .01$ . The given angle is  $\theta_1 = 27^\circ$ , and the desired angle  $\theta_A$  can be found from Fig. 23 by interpolating between  $30^\circ$  and  $20^\circ$ . Thus,  $\theta_A$  comes out to be about  $2.6^\circ$ , corresponding to a length of  $(2.6 \times 200)/360 = 1.44 \text{ cm} \div 2.54 = .567 \text{ inch}$ . This is a rather short distance from the shorted end. Indeed, the shorting disc or bar may be of this order of magnitude (instead of—theoretically—of zero length). It may therefore be advisable to use a

different method of coupling the antenna line to the resonant line, namely, by means of a loop.

*Loop Coupling.*—This is shown in Fig. 33. The loop is often known as a "hairpin" coupling. It is connected to the non-resonant line, and intercepts the magnetic



"Hairpin" Coupling

Fig. 33.—Method of coupling to a two-wire transmission line by means of a loop.

lines of force set up by the currents in the resonant line. In the case of a two-wire line, the loop can be mounted on a hinged member so that it can swing in and out of the plane of the transmission line and thus vary its coupling over a wide range of values.

In the case of a concentric line, it can be mounted through a hole in the casing, as shown in

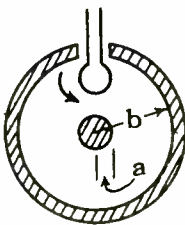


Fig. 34.—Loop coupling to a coaxial cable.

Fig. 34, and arranged to rotate (as indicated by the arrow). Maximum coupling occurs when the plane of the loop is perpendicular to the cross section of the cable, and zero coupling when it is parallel

to the cross section. The loop should be preferably located near the shorted end of the line where the current is a maximum and the voltage is a minimum. This provides maximum magnetic coupling and minimum electrostatic, thus precluding stray coupling of an unpredictable nature.

A very simple rule as to the size of the loop, which applies primarily to wave guides, may be used in the case of a concentric line. This rule states that twice the ratio of the loop area  $A_l$  to the nonconductive cross-sectional area of the line, call it  $A_c$ , is equal to the square root of the impedance ratio  $n$ , where  $n$  is taken not with respect to the actual load tapped down somewhere on the resonant line, but with respect to the equivalent shunt resistance at the open end of the line,  $R'_t$ . In formula form

$$n = \left( \frac{2 A_l}{A_c} \right)^2$$

or

$$A_l = \frac{A_c \sqrt{n}}{2} \quad (51)$$

This rule can be applied to the problem under discussion. Assume a line for which  $a = .2$  inch and  $b = 3.6 \times .2 = .72$  inch. Since  $b/a = 3.6$ ,  $Z_o = 76.8$  ohms as originally assumed. The nonconductive cross-sectional area is clearly the difference between the circular area within the outer conductor and that of the inner conductor (see Fig. 34), or

$$\begin{aligned} A_c &= \pi \left[ (.72)^2 - (.2)^2 \right] \\ &= 1.5 \text{ sq. in.} \end{aligned}$$

To determine the impedance

ratio  $n$  for this formula, remember that  $R_t$  is 7,500 ohms, but that it is equivalent to a resistance of

$$\begin{aligned} R'_t &= \frac{Q}{\omega C \lambda/4} \\ &= \frac{305}{2\pi \times 150 \times 10^6 \times 10.8 \times 10^{-12}} \\ &= 29,900 \text{ ohms} \end{aligned}$$

(Note:  $C\lambda/4 = 10.8 \text{ } \mu\text{Mf} = \frac{C\lambda}{8}$ )

located at the open end of an equivalent quarter-wave line. This is slightly greater than the original value of 29,500 ohms, and is due to the fact that the  $Q$  as finally determined by the tube tap setting was 305 instead of 300. Then

$$n = 75 \div 29,900 = .00251$$

from which, by Eq. (51)

$$a_l = \frac{1.5 \sqrt{.00251}}{2} = .0376 \text{ sq.in.}$$

The radius of the loop will be

$$r_l = \sqrt{.0376/\pi} = .1093 \text{ inch}$$

or slightly over .2 inch in diameter. In practice, a 1/4-inch diameter loop could be used so as to have somewhat excess coupling. It can then be rotated so as to cut down the coupling to the value desired. The inductance of the loop can be tuned out experimentally by slight readjustment of the line length  $\theta$ .

*Voltage Step Up.*—There remains to calculate the voltage step up of this grid-coupling circuit:

1. When  $R_t$  and  $C_t$  are connected to the end of the line, and
2. When they are tapped down on the line.

At first glance it might appear that the greatest voltage is impressed on the grid of the tube when it is connected to the open end of the line because this is the point of highest voltage. However, a moment's reflection will indicate that this is not the case; that the voltage step up from the antenna to the grid is the same in any case.

The reason is that when  $R_t$  is connected to a point of the line where the voltage is  $E_t$ , then the power dissipated in  $R_t$  is

$$W_t = \frac{E_t^2}{R_t}$$

At the point where the antenna is connected,  $R_t$  appears to be of a value  $R_A$  (in the problem  $R_A = 75$  ohms). Let the antenna terminal voltage be  $E_A$ . Then the power input from the antenna is

$$W_A = \frac{E_A^2}{R_A}$$

This power must equal that actually dissipated in  $R_t$  (ignoring any slight losses in the resonant line). Thus

$$W_A = W_t = \frac{E_A^2}{R_A} = \frac{E_t^2}{R_t}$$

or

$$\sqrt{\frac{R_t}{R_A}} = \frac{E_t}{E_A}$$

= voltage step up from antenna to grid (52)

Eq. (52) indicates that the step up is independent of the actual positions of the antenna and tube connections on the resonant line and depends simply upon the square root of the two impedances involved.

Thus for a given antenna voltage, the tube voltage (under matched conditions) is the same regardless of whether it is connected to the end of the resonant line or tapped down on it. The reason is that when the tube is tapped down on the line, the  $Q$  of the latter is increased by just the right amount to compensate for the fact that the voltage at this point is less than that at the open end.

Thus, tapping down on the line does not materially change the voltage input to the tube, but does alter the  $Q$  of the resonant line so as to meet selectivity and band width requirements.

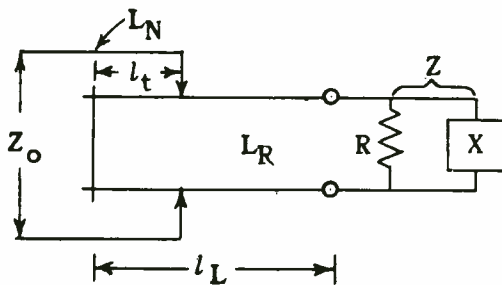
*Stub Matching.*—A more general method of matching any kind of impedance can be developed on the same basis as the preceding analysis. In this method the short-circuited portion of the resonant line up to the tap position is called a "matching stub." The method also assumes negligible line losses, but applies even where the connected load is inductive instead of capacitive in nature.

Suppose a pure resistance, such as the characteristic impedance  $Z_0$  of a low-loss non-resonant

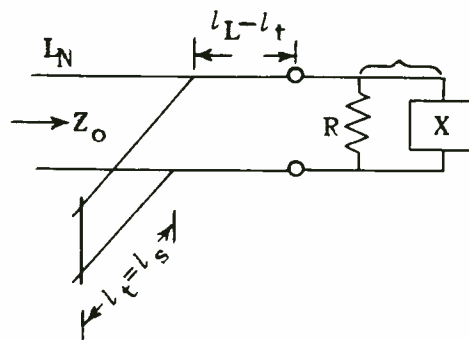
line, is to be matched to an impedance consisting partly of resistance  $R$  and reactance  $X$ . As was mentioned in the assignment on r.f. measurements, any impedance can be represented at any one frequency by a suitable resistance and reactance in parallel. Let the above  $R$  and  $X$  thus represent an impedance.

The matching can be accomplished in the same manner as illustrated in Fig. 35. Thus, in Fig. 35(A),  $L_N$  represents the non-resonant line to which it is desired to connect a net impedance  $Z_0$ , say of pure resistance. The actual impedance  $Z$  to be connected is partly resistive and partly reactive. By connecting it to a resonant line  $L_R$  of suitable length  $l_L$ , the reactance  $X$  may be tuned out. Then at the tap only  $R$  will be reflected as a resistance  $Z_0$  if the tap length  $l_t$  is chosen correctly. Note that only  $R$  is considered and that the line losses are ignored, which is permissible if  $R$  is not very great.

In the preceding cases,  $X$  was that of a capacitance, such as the input capacitance of a tube or a trimmer condenser. In this section



(A)



(B)

Fig. 35.—Use of a shorted stub for matching any kind of an impedance  $Z$ .

X may be either inductive or capacitive. If inductive, then if  $L_R$  is a shorted line, it must be greater than  $\lambda/4$  in length in order to be capacitive and tune with X: indeed, it must be as much shorter than a  $\lambda/2$  line as it would be shorter than a  $\lambda/4$  line if X were capacitive instead of inductive. Thus, the line length  $\theta_L$  given by Fig. 19 can be used for an inductive reactance termination provided a quarter-wave length or  $90^\circ$  is added to it.

On the other hand, for X inductive,  $L_R$  could be an open-circuited line in order to tune with X. In this case its line length can be had directly from Fig. 19 without the need of adding  $90^\circ$  to the value obtained from the figure. The remaining figures and calculations would then be the same in either case.

In Fig. 35(B) is shown the same circuit as in (A), but arranged somewhat differently. The portion from the tap to the short-circuit (or open-circuit, if that type of resonant line is employed) is shown in the form of a stub line, instead of part of the resonant line  $L_R$ . The rest of  $L_R$  has lost its identity and has been merged with the non-resonant portion  $L_N$ . This assumes that all portions have a common characteristic impedance which the preceding analysis did not assume.

The problem, as represented by Fig. 35(B), becomes one of choosing a suitable length  $l_s$  of open- or short-circuited stub, and a suitable distance ( $l_L - l_t$ ) of connection from the impedance end Z.

Usually the fact that Z is not equal to  $Z_0$  is made manifest by standing waves of voltage and cur-

rent along the line  $L_N$  when it is connected to Z. Hence, a simplification of the preceding method is possible. First the line is connected directly to the impedance and standing waves observed. For this purpose a vacuum tube voltmeter or crystal rectifier may be employed, depending upon the frequency. This will be discussed more fully later. If the voltage standing waves are measured, then the current loops and nodes can be determined, as they are half-way between the voltage loops and nodes. In addition, the ratio of a voltage (or current) maximum to a minimum is measured.

It will be recalled that if a line is not terminated in its characteristic impedance, a combination of a forward wave and a partial reflection of this wave in the opposite direction is set up. The reflected wave, at most, equals the forward wave in amplitude. This occurs when the mismatch is complete: short or open circuit of line. For lossless line the voltage and current nodes would be zero and the loops twice the average value. For a partial mismatch the nodes are greater than zero because the reflected wave cannot completely cancel the forward wave at the nodal points along the line, and hence the ratio of maximum to minimum voltage or current indirectly indicates the departure of the termination from the value of the characteristic impedance of the line.

In Fig. 36 are presented curves that enable the length of the stub and its distance from a current minimum to be determined. The location of the stub will be within a wavelength's distance from the

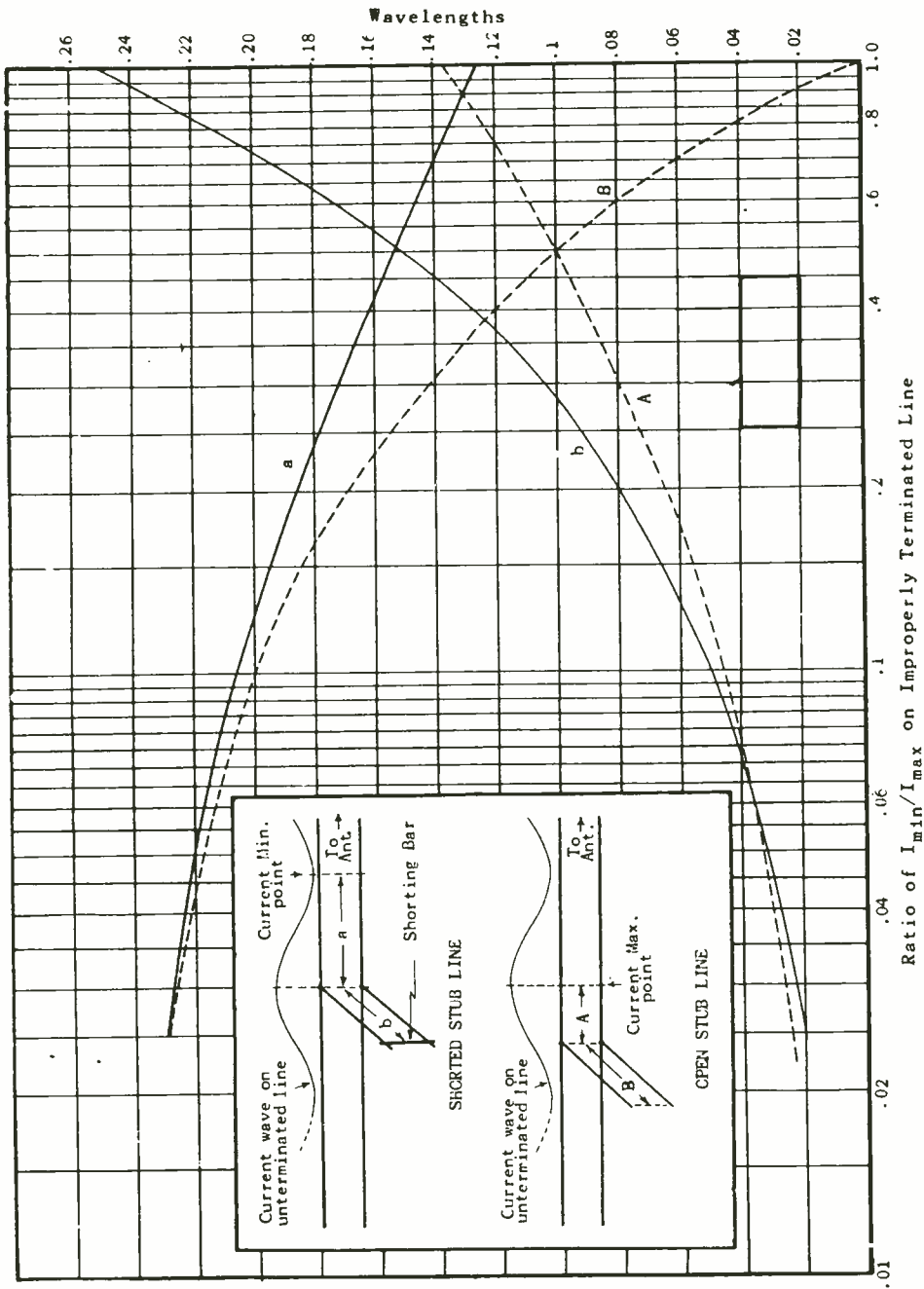


Fig. 36.—Curves giving the length of matching stub and its distance from the load impedance, in terms of the standing wave ratio.



load. It will be noted that in this method the actual value of the load  $Z$  does not have to be known directly; instead, merely its effect in producing standing waves, as determined experimentally.

To illustrate its use, suppose  $E_{\min}/E_{\max} = I_{\min}/I_{\max}$  is found to be 0.3, and it is desired to use a short-circuited stub. Reference to the  $a$  and  $b$  curves shows that the required stub length is  $b = .104 \lambda$ , and the distance from the current minimum is  $a = .172 \lambda$ .

If an open-circuited stub is desired, the stub length is  $B = .142 \lambda$ , and the position from a current maximum is  $A = .08 \lambda$ . In actual practice, some slight readjustment will have to be made experimentally to these values to eliminate standing waves in the main portion of the line to the left of the stub position. Standing waves will then appear only on the stub and the portion of the line between the stub and the load.

### CONCLUSION

This concludes the assignment on u.h.f. propagation and transmission lines. The properties of u.h.f. transmission were discussed first, and it was shown that instead of the ground and sky waves—important at the lower r.f. frequencies—the direct and ground-reflected waves are of paramount importance in determining propaga-

tion at frequencies above about 50 mc. Moreover, particularly at the higher frequencies, propagation is essentially over line-of-sight paths, and to obtain any appreciable coverage, high transmitting and (if possible) high receiving antennas are necessary.

The disadvantages of u.h.f. propagation are the line-of-sight limitations and the relatively small powers available, particularly at the highest frequencies; the advantage of u.h.f. propagation is the possibility of using directional arrays, including horns and reflectors, to provide sharp beams that furnish not only the equivalent of much greater power in the desired direction, but enable the energy to be beamed in the desired direction, thereby eliminating interference to other services located in other directions and operating on the same frequency.

At the higher frequencies lumped circuit elements become exceedingly small and impractical, but fortunately transmission line elements can take the place of the lumped elements. In particular, shorted and open-circuited quarter-wave lines can act as resonant circuits, and taps on such lines or portions thereof enable impedance matching to be performed. Several examples of such use are given, and representative problems are worked out to enable the student to calculate the performance of such elements

APPENDIX I

DERIVATION OF CURVES  
FOR DETERMINING TAP POSITION

The theory underlying the construction of the curves of Fig. 32 is comparatively simple. In Eq. (42)

$$\tan \theta_2 = \cot \theta_1 - \omega C_t Z_o \quad (42)$$

set  $\omega C_t Z_o = K$ , a constant. Thus

$$\tan \theta_2 = \cot \theta_1 - K \quad (a)$$

or

$$\begin{aligned} K &= \cot \theta_1 - \tan \theta_2 \\ &= \omega C_t Z_o \end{aligned} \quad (b)$$

If  $\omega$ ,  $C_t$ , and  $Z_o$  are given in any problem,  $K$  is determined. There are then an infinite set of pairs of values of  $\theta_1$  and  $\theta_2$  that satisfy Eq. (b). Thus, the mere determination of  $K$  in any given problem does not uniquely determine  $\theta_1$  and  $\theta_2$ .

However, two other factors must be satisfied, namely,  $Q$  and  $R_t$ . These are connected with  $\theta_1$  and  $\theta_2$  by Eq. (46):

$$Q = \frac{\omega R_t}{2} \left[ C_t + \frac{C_o l_1}{\sin^2 \theta_1} + \frac{C_o l_2}{\cos^2 \theta_2} \right] \quad (46)$$

where  $C_o$  is the capacitance per unit length of cable. Since

$$\left. \begin{aligned} l_1 &= \frac{\lambda \theta_1}{360} \\ l_2 &= \frac{\lambda \theta_2}{360} \end{aligned} \right\} \quad (c)$$

these values may be substituted in

Eq. (46) to obtain

$$Q = \frac{\omega R_t}{2} \left[ C_t + C_o \left( \frac{\frac{\lambda}{360} \theta_1}{\sin^2 \theta_1} + \frac{\frac{\lambda}{360} \theta_2}{\cos^2 \theta_2} \right) \right]$$

or, multiplying out,

$$Q = \frac{\omega R_t C_t}{2} + \frac{\omega R_t C_o \lambda}{720} \left( \frac{\theta_1}{\sin^2 \theta_1} + \frac{\theta_2}{\cos^2 \theta_2} \right) \quad (d)$$

Now solve for the right-hand quantities in the parenthesis:

$$\begin{aligned} \frac{\theta_1}{\sin^2 \theta_1} + \frac{\theta_2}{\cos^2 \theta_2} &= \frac{Q - \frac{\omega R_t C_t}{2}}{\frac{\omega R_t C_o \lambda}{720}} \\ &= \frac{720 \left( Q - \frac{\omega R_t C_t}{2} \right)}{\omega R_t C_o \lambda} \end{aligned} \quad (e)$$

Let

$$V = \frac{720 \left( Q - \frac{\omega R_t C_t}{2} \right)}{\omega R_t C_o \lambda} \quad (f)$$

so that

$$V = \frac{\theta_1}{\sin^2 \theta_1} + \frac{\theta_2}{\cos^2 \theta_2} \quad (g)$$

If  $Q$ ,  $\omega$ ,  $R_t$ ,  $C_t$ , and  $C_o$  are all given in the problem,  $V$  can be calculated by Eq. (f). Then Eq. (g) gives a rather complicated relationship between  $\theta_1$ ,  $\theta_2$ , and  $V$ . Just as in the case of the quantity  $K$ , for any given value of  $V$  there are an infinite set of pairs of values

of  $\theta_1$ , and  $\theta_2$  that satisfy Eq. (g), so that the determination of  $V$  in any given problem does not uniquely determine  $\theta_1$  and  $\theta_2$ .

However, if in the problem all quantities are given to determine both  $V$  and  $K$ , then there are obtained two equations in  $\theta_1$  and  $\theta_2$ , namely Eqs. (b) and (g). Two equations in two unknowns can determine the unknowns uniquely; the simultaneous solution of Eqs. (b) and (g) will give a unique value for  $\theta_1$  and for  $\theta_2$ , on the assumption that  $V$  and  $K$  are determined by the data in the problem.

Unfortunately, there is no simple, algebraic method for solving Eqs. (b) and (g) because these involve trigonometric functions. It can be shown by the methods of the calculus that a trigonometric function corresponds to an algebraic equation of infinite degree, and is therefore called a transcendental function; i.e., it transcends or is beyond the ordinary algebraic equation of finite degree.

Hence, some other means of solving these equations is necessary. A practical method is a graphical solution. Various values of  $K$  are chosen, such as  $K = 0, 0.1, 0.2$ , etc. For each value of  $K$ , a value of  $\theta_2$  is chosen, substituted together with the value of  $K$  in Eq. (b), and the value of  $\theta_1$  found in conjunction with a set of trigonometric tables. (Or  $\theta_1$  can be chosen, and  $\theta_2$  determined.)

For example, for  $K = 0.1$ , if  $\theta_2$  is chosen as  $5^\circ$ ,  $\theta_1$  is found to equal  $79.4^\circ$ . If  $\theta_2$  is chosen as  $10^\circ$ ,  $\theta_1 = 74.6^\circ$ , and so on. The pairs of values of  $\theta_1$  and  $\theta_2$  are plotted, and give rise to a curve labelled  $K = 0.1$  in Fig. 32. Similar curves for  $K = 0.2$ , etc. are

plotted, and give rise to the family of  $K$ -curves shown in the figure.

A similar procedure is employed with regard to Eq. (g). Values of  $V = 0.9, 1.0, 1.1, 1.2$ , etc., are chosen. For each value of  $V$ , a value say, of  $\theta_1$  is chosen, and  $\theta_2$  solved for from Eq. (g). A whole series of pairs of values of  $\theta_1$  and  $\theta_2$  are obtained for each value of  $V$ ; these are then plotted as shown in Fig. 32. A whole family of such curves are obtained for successive values of  $V$ .

If a given pair of values for  $\theta_1$  and  $\theta_2$  are to satisfy both equations, they must lie both on the given  $V$ -curve and on the given  $K$ -curve. This can only occur where the two curves intersect, since the intersection is clearly such a common point. Hence the procedure described in the text; after the values of  $V$  and  $K$  have been independently determined by the data given in the problem, the corresponding curves are chosen, and where they intersect is the point determining both  $\theta_1$  and  $\theta_2$ .

It is thus apparent that the graphical method is just as easy to apply to complicated equations as to simple equations, and is therefore a valuable aid in the simultaneous solution of complicated equations. It is true that the range is limited by the number of curves drawn, and the accuracy by such mechanical factors as the accuracy of the drawing of the curves, the thickness of the lines, the scale used, and the accuracy of interpolation. However, for most practical purposes, the accuracy is sufficient for an engineering solution.

Refer once more to Eq. (f). This can be multiplied out to give

$$V = \frac{720Q - 360 \omega R_t C_t}{\omega R_t C_o \lambda} \quad (h)$$

Since the velocity of propagation on a low-loss transmission line is practically that of light:  $C = 3 \times 10^{10}$  cm/sec., and since further

$$C = f\lambda$$

so that

$$\omega\lambda = 2\pi C = 6\pi \times 10^{10} \text{ cm/sec.}$$

This numerical quantity can be substituted for  $\omega\lambda$  in the denominator of Eq. (h), so that there is obtained:

$$V = \frac{3820}{C_o} \frac{Q}{R_t} - \frac{1910}{C_o} \omega C_t \quad (i)$$

where  $C_o$  is in  $\mu\mu\text{f/cm}$ .

From Eq. (36) in the text, we have

$$C_o = \frac{33.3}{Z_o} \quad (36)$$

This can be substituted in Eq. (i) to yield

$$V = 114.5 \frac{Q Z_o}{R_t} - 57.3 \omega C_t Z_o \quad (j)$$

Note that  $V$  is now expressed in terms of  $Z_o$  instead of  $C_o$ . This is desirable, since a transmission line is more usually specified in terms of its characteristic impedance  $Z_o$  than in terms of its capacitance  $C_o$  per unit length.

A further detail (or possibly refinement) is to divide Eq. (j) by 100 to yield smaller numbers. This is usually more satisfying from a psychological viewpoint, but is of no mathematical significance. When this division is performed, there is obtained

$$V = 1.145 \frac{Q Z_o}{R_t} - 3.6 f C_t Z_o \quad (47)$$

which is Eq. (47) of the text. It is to be noted that  $f$  is in cycles per sec. and  $C_t$  is in farads in this formula.

Eq. (b) for  $K$  can be expressed in terms of  $f$  instead of  $\omega$ :

$$K = 6.28 f C_t Z_o \quad (48)$$

which is Eq. (48) of the text. However, in calculating the points for the curves of Fig. 32, the actual values for  $V$  are employed. In labelling the curves, on the other hand, these values of  $V$  are divided by 100 to furnish values that conform with Eq. (47).

If  $Z_o = 76.8$  is substituted in Eqs. (47) and (48), there are obtained

$$V = \frac{87.9 Q}{R_t} - 276.5 f C_t \quad (49)$$

$$K = 482 f C_t \quad (50)$$

where the equation numbers here again correspond to these in the text. It will be observed that even after division by 100, numbers such as 87.9, 276.5, and 482 are obtained. Had the division not been initially performed, numbers 100 times greater would have been obtained, with the greater possibility of producing arithmetical errors.

In summary, the curves of Eq. (32) are based on the idea of separating the functions of  $\theta_1$  and  $\theta_2$  from the rest of the variables, and setting the combinations of the latter equal to  $V$  and  $K$ , respectively. Then curves are drawn in which, for each value of  $V$  and  $K$ , values of  $\theta_1$  and  $\theta_2$  are found satisfying the

respective equations. The intersection of a given curve of one family with the corresponding one of the other family, gives a unique value for  $\theta_1$  and  $\theta_2$  that satisfies

the initial conditions of the problem. This is so because the initial conditions determine the value of V and K to be used in choosing the proper curve of each family.

*ULTRA-HIGH FREQUENCY TECHNIQUE*

EXAMINATION

1. (A) What becomes of the ground wave at ultra-high frequencies?

(B) What wave is effective at ultra-high frequencies?

2. (A) Give two reasons for the value of a high transmitting and/or receiving antenna at the low end of the u.h.f. spectrum.

(B) Why is one of the above reasons eliminated when one gets into the microwave range?

ULTRA-HIGH FREQUENCY TECHNIQUE

EXAMINATION, Page 2.

2. (Continued)

3. A transmitter feeds 100 watts at a frequency of 150 mc into an antenna array at a height of 225 feet. The antenna array is similar to that shown in Fig. 7. A similar array is used for the receiver. The latter is 100 feet high, and is located at the limit of the line-of-sight distance from the transmitter.

(A) What is the distance between receiver and transmitter?

(B) What is the value of the received power?

ULTRA-HIGH FREQUENCY TECHNIQUE

EXAMINATION, Page 3.

3. (C) What is the field strength in  $\mu$ -volts/meter at the receiving location?

(D) What voltage would be induced in the receiving antenna if it were a dipole instead of an array, while the transmitting conditions were unchanged?



*ULTRA-HIGH FREQUENCY TECHNIQUE*

EXAMINATION, Page 4.

4. A quarter-wave coaxial line, shorted at one end, has a  $Q$  of 10,000. Suppose another line exactly the same as the above, except that it is twice as long and shorted at both ends, is used. What will be its  $Q$ ? Explain.

HINT: Consider the half-wave line as consisting of two quarter-wave lines, connected to one another at their adjacent ends, and shorted at their far ends. Such two quarter-wave lines appear to be in parallel to the generator. Consider how this affects the ratio of stored to dissipated energy as compared to one quarter-wave line alone.

5. What would be the advantage of the second line in Question 4 over the quarter-wave line, as regards radiation in the microwave range if either line is driven by a generator through a coupling loop at a shorted end?

ULTRA-HIGH FREQUENCY TECHNIQUE

EXAMINATION, Page 5.

5. (Continued)

6. A quarter-wave resonant line oscillator is to be built to operate at 300 mc. The input resistance of the tube is 3,000 ohms. It is desired to have a net  $Q$  of 2,500, and for the line to present to the grid of the tube a resistance of 3,000 ohms. Design the line and calculate the tap position.

HINT: Note that the impedance looking into the line at the grid tap is equal to the input resistance of the tube. This means that the damping of the line is due in equal parts to the line losses and input resistance of the tube; i.e., the line  $Q$  alone is double the net  $Q$ . Hence, the line must be designed to have the proper  $Q$ . In calculating its dimensions for the desired  $Q$ , use the optimum value of  $Z_0$  for which  $b/a = 3.6$ . This means that either  $a$  or  $b$  has to be found; for example,  $a$ , then  $b$  is simple  $3.6a$ .

ULTRA-HIGH FREQUENCY TECHNIQUE

EXAMINATION, Page 6.

6. (Continued)

7. (A) Calculate the depth of penetration in inches for copper of a current whose frequency is 30,000 mc.

*ULTRA-HIGH FREQUENCY TECHNIQUE*

EXAMINATION, Page 7.

7. (B) How would the resistances of two copper rods of equal length and solid circular cross-section, but one having four times the cross-sectional area of the other, compare at this frequency? At d.c.?
  
8. Calculate the attenuation of 100 feet of a two-wire line whose radii are each 2 mm, and whose separation between conductor centers is 2 cm, operated at 900 mc.
  
9. A communication system is to operate at 500 mc. It is desired to have an image attenuation of 40 db, and the  $Q$  of the antenna system is 200. What must be the intermediate frequency?

ULTRA-HIGH FREQUENCY TECHNIQUE

EXAMINATION, Page 8. ,

9. (Continued)

10. Given a converter tube whose input resistance is 2,300 ohms and whose input capacitance is  $4 \mu\mu\text{f}$ . The operating frequency is 350 mc, and the desired half-band width is 3.5 mc. Assume a quarter-wave shorted concentric line is to be employed as the step-up device, whose inner conductor is 0.1 inch diameter, and whose outer conductor is  $3.6 \times 0.1 = .36$  inches. The characteristic impedance of the line is therefore 76.8 ohms. The non-resonant antenna line to be connected to the above resonant line has a characteristic impedance of 75 ohms. The intermediate frequency is to be 30 mc.

(A) Calculate the Q of the resonant line, loaded with the tube and antenna, required to give the desired band width.

ULTRA-HIGH FREQUENCY TECHNIQUE

EXAMINATION, Page 9

10. (B) Calculate the position of the grid tap  $\theta_c$  in electrical degrees from the shorted end of the resonant line; also find the position in inches. First calculate V and K, then find  $\theta_1$  and  $\theta_2$ .

(C) Calculate the position of the antenna tap  $\theta_A$  in degrees from the end of the resonant line; also the position in inches.

(D) Calculate the actual length of the line in degrees and in inches,  $\theta_1 + \theta_2$ .

*ULTRA-HIGH FREQUENCY TECHNIQUE*

EXAMINATION, Page 10

10. (D) continued.

(E) Calculate the image rejection in db.

(F) Check your calculations by computing the  $Q$  of the actual line using the equation (46) for this check.

